

# Black Cat Themed Arrays

These printables are provided *FREE* of charge. Please do share my printables. But please remember that all of my printables are for personal use. You cannot claim these printables or sell them as your own. All the printables and pictures are the property of 3 Dinosaurs.

## Please DO

Download the files to your computers and print them off for personal use.  
Direct people to the blog or site when sharing with others.  
Give proper credit back to 3 Dinosaurs when blogging about our files.

## Please Do Not

Link directly to the pdf file.  
Alter my files in any way.  
Store them on your website in any format.  
Seek to use these to drive traffic to your site or sell them in any way.  
Print off and sell them to others.

Please remember this is about being Honest.

I reserve the right to change this policy at any time.



## Thanks 3 Dinosaurs

Graphics: Purchased from [Melonheadz Illustrations](#) & [Whimsy Clips](#)



Created by Cassie @ 3Dinosaurs.com



1

Created by Cassie @ 3Dinosaurs.com



2

Created by Cassie @ 3Dinosaurs.com



3

Created by Cassie @ 3Dinosaurs.com



4

Created by Cassie @ 3Dinosaurs.com



5

Created by Cassie @ 3Dinosaurs.com



6

Created by Cassie @ 3Dinosaurs.com



7

Created by Cassie @ 3Dinosaurs.com



8


Created by Cassie @ 3Dinosaurs.com





9

Created by Cassie @ 3Dinosaurs.com



10

Created by Cassie @ 3Dinosaurs.com



11


Created by Cassie @ 3Dinosaurs.com



12

Created by Cassie @ 3Dinosaurs.com

# Black Cat Array



Name: \_\_\_\_\_

Use the array cards and write the equation two ways.

Created by Cassie @ 3Dinosaurs.com

$$\underline{\quad} \times \underline{\quad} = \underline{\quad} \quad \textcircled{1}$$
$$\underline{\quad} \times \underline{\quad} = \underline{\quad}$$

$$\underline{\quad} \times \underline{\quad} = \underline{\quad} \quad \textcircled{2}$$
$$\underline{\quad} \times \underline{\quad} = \underline{\quad}$$

$$\underline{\quad} \times \underline{\quad} = \underline{\quad} \quad \textcircled{3}$$
$$\underline{\quad} \times \underline{\quad} = \underline{\quad}$$

$$\underline{\quad} \times \underline{\quad} = \underline{\quad} \quad \textcircled{4}$$
$$\underline{\quad} \times \underline{\quad} = \underline{\quad}$$

$$\underline{\quad} \times \underline{\quad} = \underline{\quad} \quad \textcircled{5}$$
$$\underline{\quad} \times \underline{\quad} = \underline{\quad}$$

$$\underline{\quad} \times \underline{\quad} = \underline{\quad} \quad \textcircled{6}$$
$$\underline{\quad} \times \underline{\quad} = \underline{\quad}$$

$$\underline{\quad} \times \underline{\quad} = \underline{\quad} \quad \textcircled{7}$$
$$\underline{\quad} \times \underline{\quad} = \underline{\quad}$$

$$\underline{\quad} \times \underline{\quad} = \underline{\quad} \quad \textcircled{8}$$
$$\underline{\quad} \times \underline{\quad} = \underline{\quad}$$

$$\underline{\quad} \times \underline{\quad} = \underline{\quad} \quad \textcircled{9}$$
$$\underline{\quad} \times \underline{\quad} = \underline{\quad}$$

$$\underline{\quad} \times \underline{\quad} = \underline{\quad} \quad \textcircled{10}$$
$$\underline{\quad} \times \underline{\quad} = \underline{\quad}$$

$$\underline{\quad} \times \underline{\quad} = \underline{\quad} \quad \textcircled{11}$$
$$\underline{\quad} \times \underline{\quad} = \underline{\quad}$$

$$\underline{\quad} \times \underline{\quad} = \underline{\quad} \quad \textcircled{12}$$
$$\underline{\quad} \times \underline{\quad} = \underline{\quad}$$

# Black Cat Array


Name: \_\_\_\_\_

Use the array cards and write the math facts.

Created by Cassie @ 3Dinosaurs.com

<div><div><div><div><div></div><div></div></div><div><div></div><div></div></div></div><div><div><div></div><div></div></div><div><div></div><div></div></div></div><div><div><div></div><div></div></div><div><div></div><div></div></div></div><div><div><div></div><div></div></div><div><div></div><div></div></div></div></div><div><div><div></div><div></div></div><div><div></div><div></div></div></div><div><div><div></div><div></div></div><div><div></div><div></div></div></div><div><div><div></div><div></div></div><div><div></div><div></div></div></div></div> <div><div><div></div><div></div></div><div><div></div><div></div></div></div> <div><div><div></div><div></div></div><div><div></div><div></div></div></div> <div>1</div>	<div><div><div><div><div></div><div></div></div><div><div></div><div></div></div></div><div><div><div></div><div></div></div><div><div></div><div></div></div></div><div><div><div></div><div></div></div><div><div></div><div></div></div></div><div><div><div></div><div></div></div><div><div></div><div></div></div></div></div><div><div><div></div><div></div></div><div><div></div><div></div></div></div><div><div><div></div><div></div></div><div><div></div><div></div></div></div><div><div><div></div><div></div></div><div><div></div><div></div></div></div></div> <div><div><div></div><div></div></div><div><div></div><div></div></div></div> <div><div><div></div><div></div></div><div><div></div><div></div></div></div> <div>2</div>	<div><div><div><div><div></div><div></div></div><div><div></div><div></div></div></div><div><div><div></div><div></div></div><div><div></div><div></div></div></div><div><div><div></div><div></div></div><div><div></div><div></div></div></div><div><div><div></div><div></div></div><div><div></div><div></div></div></div></div><div><div><div></div><div></div></div><div><div></div><div></div></div></div><div><div><div></div><div></div></div><div><div></div><div></div></div></div><div><div><div></div><div></div></div><div><div></div><div></div></div></div></div> <div><div><div></div><div></div></div><div><div></div><div></div></div></div> <div><div><div></div><div></div></div><div><div></div><div></div></div></div> <div>3</div>
<div><div><div><div><div></div><div></div></div><div><div></div><div></div></div></div><div><div><div></div><div></div></div><div><div></div><div></div></div></div><div><div><div></div><div></div></div><div><div></div><div></div></div></div><div><div><div></div><div></div></div><div><div></div><div></div></div></div></div><div><div><div></div><div></div></div><div><div></div><div></div></div></div><div><div><div></div><div></div></div><div><div></div><div></div></div></div><div><div><div></div><div></div></div><div><div></div><div></div></div></div></div> <div><div><div></div><div></div></div><div><div></div><div></div></div></div> <div><div><div></div><div></div></div><div><div></div><div></div></div></div> <div>4</div>	<div><div><div><div><div></div><div></div></div><div><div></div><div></div></div></div><div><div><div></div><div></div></div><div><div></div><div></div></div></div><div><div><div></div><div></div></div><div><div></div><div></div></div></div><div><div><div></div><div></div></div><div><div></div><div></div></div></div></div><div><div><div></div><div></div></div><div><div></div><div></div></div></div><div><div><div></div><div></div></div><div><div></div><div></div></div></div><div><div><div></div><div></div></div><div><div></div><div></div></div></div></div> <div><div><div></div><div></div></div><div><div></div><div></div></div></div> <div><div><div></div><div></div></div><div><div></div><div></div></div></div> <div>5</div>	<div><div><div><div><div></div><div></div></div><div><div></div><div></div></div></div><div><div><div></div><div></div></div><div><div></div><div></div></div></div><div><div><div></div><div></div></div><div><div></div><div></div></div></div><div><div><div></div><div></div></div><div><div></div><div></div></div></div></div><div><div><div></div><div></div></div><div><div></div><div></div></div></div><div><div><div></div><div></div></div><div><div></div><div></div></div></div><div><div><div></div><div></div></div><div><div></div><div></div></div></div></div> <div><div><div></div><div></div></div><div><div></div><div></div></div></div> <div><div><div></div><div></div></div><div><div></div><div></div></div></div> <div>6</div>
<div><div><div><div><div></div><div></div></div><div><div></div><div></div></div></div><div><div><div></div><div></div></div><div><div></div><div></div></div></div><div><div><div></div><div></div></div><div><div></div><div></div></div></div><div><div><div></div><div></div></div><div><div></div><div></div></div></div></div><div><div><div></div><div></div></div><div><div></div><div></div></div></div><div><div><div></div><div></div></div><div><div></div><div></div></div></div><div><div><div></div><div></div></div><div><div></div><div></div></div></div></div> <div><div><div></div><div></div></div><div><div></div><div></div></div></div> <div><div><div></div><div></div></div><div><div></div><div></div></div></div> <div>7</div>	<div><div><div><div><div></div><div></div></div><div><div></div><div></div></div></div><div><div><div></div><div></div></div><div><div></div><div></div></div></div><div><div><div></div><div></div></div><div><div></div><div></div></div></div><div><div><div></div><div></div></div><div><div></div><div></div></div></div></div><div><div><div></div><div></div></div><div><div></div><div></div></div></div><div><div><div></div><div></div></div><div><div></div><div></div></div></div><div><div><div></div><div></div></div><div><div></div><div></div></div></div></div> <div><div><div></div><div></div></div><div><div></div><div></div></div></div> <div><div><div></div><div></div></div><div><div></div><div></div></div></div> <div>8</div>	<div><div><div><div><div></div><div></div></div><div><div></div><div></div></div></div><div><div><div></div><div></div></div><div><div></div><div></div></div></div><div><div><div></div><div></div></div><div><div></div><div></div></div></div><div><div><div></div><div></div></div><div><div></div><div></div></div></div></div><div><div><div></div><div></div></div><div><div></div><div></div></div></div><div><div><div></div><div></div></div><div><div></div><div></div></div></div><div><div><div></div><div></div></div><div><div></div><div></div></div></div></div> <div><div><div></div><div></div></div><div><div></div><div></div></div></div> <div><div><div></div><div></div></div><div><div></div><div></div></div></div> <div>9</div>
<div><div><div><div><div></div><div></div></div><div><div></div><div></div></div></div><div><div><div></div><div></div></div><div><div></div><div></div></div></div><div><div><div></div><div></div></div><div><div></div><div></div></div></div><div><div><div></div><div></div></div><div><div></div><div></div></div></div></div><div><div><div></div><div></div></div><div><div></div><div></div></div></div><div><div><div></div><div></div></div><div><div></div><div></div></div></div><div><div><div></div><div></div></div><div><div></div><div></div></div></div></div> <div><div><div></div><div></div></div><div><div></div><div></div></div></div> <div><div><div></div><div></div></div><div><div></div><div></div></div></div> <div>10</div>	<div><div><div><div><div></div><div></div></div><div><div></div><div></div></div></div><div><div><div></div><div></div></div><div><div></div><div></div></div></div><div><div><div></div><div></div></div><div><div></div><div></div></div></div><div><div><div></div><div></div></div><div><div></div><div></div></div></div></div><div><div><div></div><div></div></div><div><div></div><div></div></div></div><div><div><div></div><div></div></div><div><div></div><div></div></div></div><div><div><div></div><div></div></div><div><div></div><div></div></div></div></div> <div><div><div></div><div></div></div><div><div></div><div></div></div></div> <div><div><div></div><div></div></div><div><div></div><div></div></div></div> <div>11</div>	<div><div><div><div><div></div><div></div></div><div><div></div><div></div></div></div><div><div><div></div><div></div></div><div><div></div><div></div></div></div><div><div><div></div><div></div></div><div><div></div><div></div></div></div><div><div><div></div><div></div></div><div><div></div><div></div></div></div></div><div><div><div></div><div></div></div><div><div></div><div></div></div></div><div><div><div></div><div></div></div><div><div></div><div></div></div></div><div><div><div></div><div></div></div><div><div></div><div></div></div></div></div> <div><div><div></div><div></div></div><div><div></div><div></div></div></div> <div><div><div></div><div></div></div><div><div></div><div></div></div></div> <div>12</div>

# Black Cat Array




Name: \_\_\_\_\_

Use the array cards and write the equation two ways.

Created by Cassie @ 3Dinosaurs.com

$\underline{\hspace{1cm}} \div \underline{\hspace{1cm}} = \underline{\hspace{1cm}}$ $\underline{\hspace{1cm}} \div \underline{\hspace{1cm}} = \underline{\hspace{1cm}}$ <div>1</div>	$\underline{\hspace{1cm}} \div \underline{\hspace{1cm}} = \underline{\hspace{1cm}}$ $\underline{\hspace{1cm}} \div \underline{\hspace{1cm}} = \underline{\hspace{1cm}}$ <div>2</div>	$\underline{\hspace{1cm}} \div \underline{\hspace{1cm}} = \underline{\hspace{1cm}}$ $\underline{\hspace{1cm}} \div \underline{\hspace{1cm}} = \underline{\hspace{1cm}}$ <div>3</div>
$\underline{\hspace{1cm}} \div \underline{\hspace{1cm}} = \underline{\hspace{1cm}}$ $\underline{\hspace{1cm}} \div \underline{\hspace{1cm}} = \underline{\hspace{1cm}}$ <div>4</div>	$\underline{\hspace{1cm}} \div \underline{\hspace{1cm}} = \underline{\hspace{1cm}}$ $\underline{\hspace{1cm}} \div \underline{\hspace{1cm}} = \underline{\hspace{1cm}}$ <div>5</div>	$\underline{\hspace{1cm}} \div \underline{\hspace{1cm}} = \underline{\hspace{1cm}}$ $\underline{\hspace{1cm}} \div \underline{\hspace{1cm}} = \underline{\hspace{1cm}}$ <div>6</div>
$\underline{\hspace{1cm}} \div \underline{\hspace{1cm}} = \underline{\hspace{1cm}}$ $\underline{\hspace{1cm}} \div \underline{\hspace{1cm}} = \underline{\hspace{1cm}}$ <div>7</div>	$\underline{\hspace{1cm}} \div \underline{\hspace{1cm}} = \underline{\hspace{1cm}}$ $\underline{\hspace{1cm}} \div \underline{\hspace{1cm}} = \underline{\hspace{1cm}}$ <div>8</div>	$\underline{\hspace{1cm}} \div \underline{\hspace{1cm}} = \underline{\hspace{1cm}}$ $\underline{\hspace{1cm}} \div \underline{\hspace{1cm}} = \underline{\hspace{1cm}}$ <div>9</div>
$\underline{\hspace{1cm}} \div \underline{\hspace{1cm}} = \underline{\hspace{1cm}}$ $\underline{\hspace{1cm}} \div \underline{\hspace{1cm}} = \underline{\hspace{1cm}}$ <div>10</div>	$\underline{\hspace{1cm}} \div \underline{\hspace{1cm}} = \underline{\hspace{1cm}}$ $\underline{\hspace{1cm}} \div \underline{\hspace{1cm}} = \underline{\hspace{1cm}}$ <div>11</div>	$\underline{\hspace{1cm}} \div \underline{\hspace{1cm}} = \underline{\hspace{1cm}}$ $\underline{\hspace{1cm}} \div \underline{\hspace{1cm}} = \underline{\hspace{1cm}}$ <div>12</div>

# Black Cat Array



Name: \_\_\_\_\_

Answer the following questions using the array cards.

Created by Cassie @ 3Dinosaurs.com

<p>____ row of ____ = ____</p> <p>____ columns of ____ = ____</p>	<p>____ row of ____ = ____</p> <p>____ columns of ____ = ____</p>	<p>____ row of ____ = ____</p> <p>____ columns of ____ = ____</p>
<p>____ row of ____ = ____</p> <p>____ columns of ____ = ____</p>	<p>____ row of ____ = ____</p> <p>____ columns of ____ = ____</p>	<p>____ row of ____ = ____</p> <p>____ columns of ____ = ____</p>
<p>____ row of ____ = ____</p> <p>____ columns of ____ = ____</p>	<p>____ row of ____ = ____</p> <p>____ columns of ____ = ____</p>	<p>____ row of ____ = ____</p> <p>____ columns of ____ = ____</p>
<p>____ row of ____ = ____</p> <p>____ columns of ____ = ____</p>	<p>____ row of ____ = ____</p> <p>____ columns of ____ = ____</p>	<p>____ row of ____ = ____</p> <p>____ columns of ____ = ____</p>



# Black Cat Array



Name: \_\_\_\_\_

Answer the following questions using the array cards.

Created by Cassie @ 3Dinosaurs.com

There are ____ cats in one row. There are ____ cats in one column. ____ columns of ____ = ____ ____ row of ____ = ____	①	There are ____ cats in one row. There are ____ cats in one column. ____ columns of ____ = ____ ____ row of ____ = ____	②
There are ____ cats in one row. There are ____ cats in one column. ____ columns of ____ = ____ ____ row of ____ = ____	③	There are ____ cats in one row. There are ____ cats in one column. ____ columns of ____ = ____ ____ row of ____ = ____	④
There are ____ cats in one row. There are ____ cats in one column. ____ columns of ____ = ____ ____ row of ____ = ____	⑤	There are ____ cats in one row. There are ____ cats in one column. ____ columns of ____ = ____ ____ row of ____ = ____	⑥
There are ____ cats in one row. There are ____ cats in one column. ____ columns of ____ = ____ ____ row of ____ = ____	⑦	There are ____ cats in one row. There are ____ cats in one column. ____ columns of ____ = ____ ____ row of ____ = ____	⑧
There are ____ cats in one row. There are ____ cats in one column. ____ columns of ____ = ____ ____ row of ____ = ____	⑨	There are ____ cats in one row. There are ____ cats in one column. ____ columns of ____ = ____ ____ row of ____ = ____	⑩
There are ____ cats in one row. There are ____ cats in one column. ____ columns of ____ = ____ ____ row of ____ = ____	⑪	There are ____ cats in one row. There are ____ cats in one column. ____ columns of ____ = ____ ____ row of ____ = ____	⑫