

Grasshopper Jump Measuring

These files are copyright by 3Dinosaurs.com

Please DO

Download the files to your computers and print them off for personal or classroom use.

Give credit proper back to [3 Dinosaurs](#) when blogging about our files.

You May Not

Sell or host these files anywhere.

Alter my files in any way.

Print off and sell them to others. This includes selling new or used.

Share in any way with other people.

Please remember this is about being Honest.

If you have questions please contact me. Please don't assume that it is okay to do something because it was not listed

Please read the [Terms of Use](#). If you have any questions please let me know.

Thanks! 3Dinosaurs.com




Graphics: Purchased from [Melonheadz Illustrations](#).

[Whimsy Clips](#)

[Web Site](#)
[Facebook](#)
[Twitter](#)
[RSS](#)



Name: _____



Measure the Jump

Measure how high the grasshoppers jumped. Write how many block the jump was. Then color the blocks to match the jump.

The grasshoppers jump is ____ cubes high.

1

The grasshoppers jump is ____ cubes high

2

The grasshoppers jump is ____ cubes high.

3

The grasshoppers jump is ____ cubes high.

4

The grasshoppers jump is ____ cubes high.

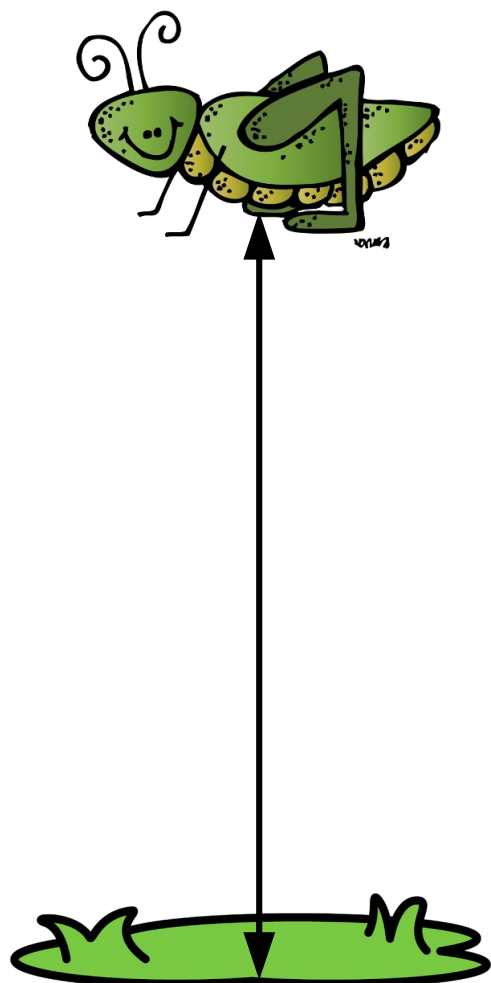
5

The grasshoppers jump is ____ cubes high.

6

How high did the grasshopper jump?


1



Created by Cassie @ 3Dinosaurs.com

How high did the grasshopper jump?

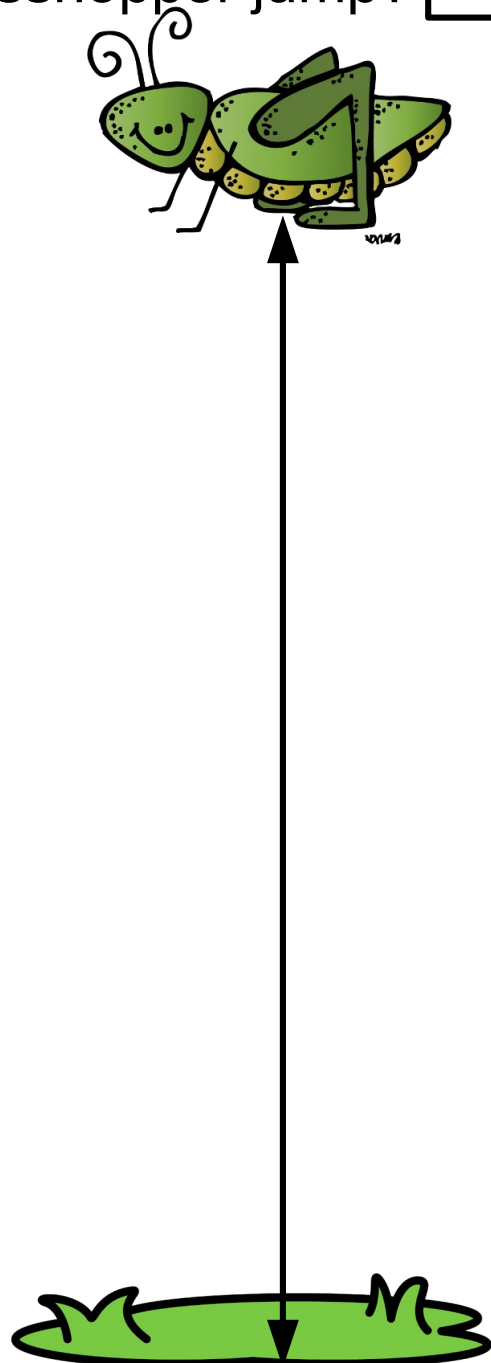
2



Created by Cassie @ 3Dinosaurs.com

How high did the grasshopper jump?

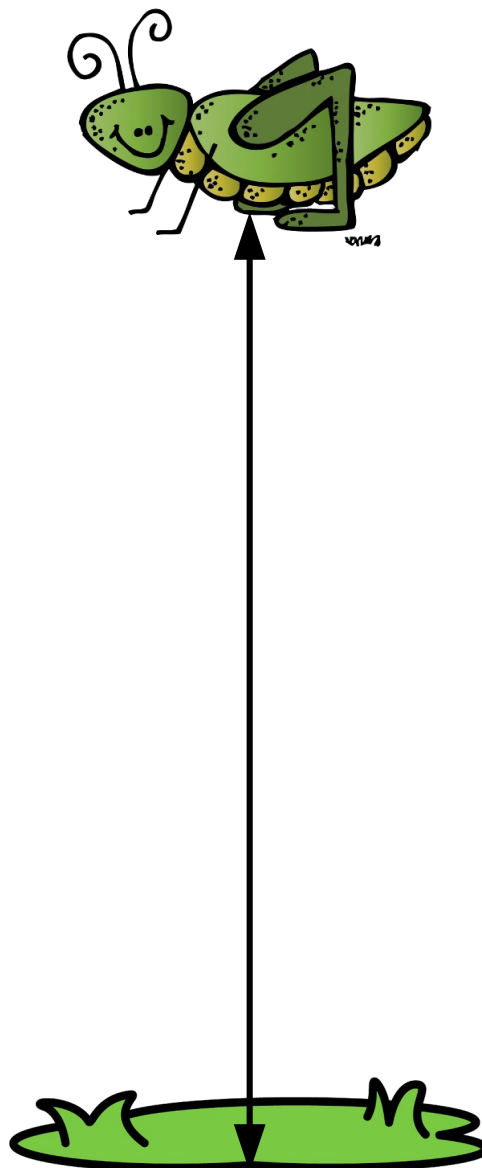
3




Created by Cassie @ 3Dinosaurs.com

How high did the grasshopper jump?

4




Created by Cassie @ 3Dinosaurs.com



How high did the grasshopper jump?


5



Created by Cassie @ 3Dinosaurs.com

How high did the grasshopper jump?

6



Created by Cassie @ 3Dinosaurs.com

--	--	--	--	--	--	--	--