

Beanstalk Measuring

These files are copyright by 3Dinosaurs.com

Please DO

Download the files to your computers and print them off for personal or classroom use.

Give credit proper back to [3 Dinosaurs](#) when blogging about our files.

You May Not

Sell or host these files anywhere.

Alter my files in any way.

Print off and sell them to others. This includes selling new or used.

Share in any way with other people.

Please remember this is about being Honest.

If you have questions please contact me. Please don't assume that it is okay to do something because it was not listed

Please read the [Terms of Use](#). If you have any questions please let me know.

Thanks! 3Dinosaurs.com



[Web Site](#)
[Facebook](#)
[Twitter](#)

Graphics: Purchased from [Melonheadz Illustrations](#).

[Whimsy Clips](#)



Then write how many block tall they are.

Created by Cassie @ 3Dinosaurs.com

[illegible][illegible]

3

A diagram illustrating a sequence of 8 boxes. On the left, a single box contains the number 4. To its right, a vertical column of 8 empty boxes is shown, representing the sequence to be completed.

[illegible][illegible]

How tall is the beanstalk?


1



Created by Cassie @ 3Dinosaurs.com

How tall is the beanstalk?


2



Created by Cassie @ 3Dinosaurs.com

How tall is the beanstalk?


3



Created by Cassie @ 3Dinosaurs.com

How tall is the beanstalk?


4



Created by Cassie @ 3Dinosaurs.com

How tall is the beanstalk?


5



Created by Cassie @ 3Dinosaurs.com

How tall is the beanstalk?

6



Created by Cassie @ 3Dinosaurs.com

--	--	--	--	--	--	--	--