

Dice Multiplication Mat

These files are copyright by 3Dinosaurs.com

Please DO

Download the files to your computers and print them off for personal or classroom use.

Give credit proper back to [3 Dinosaurs](#) when blogging about our files.

You May Not

Sell or host these files anywhere.

Alter my files in any way.

Print off and sell them to others. This includes selling new or used.

Share in anyway with other people.

Please remember this is about being Honest.

If you have questions please contact me. Please don't assume that it is okay to do something because it was not listed

Please read the [Terms of Use](#). If you have any questions please let me know.

Thanks! 3Dinosaurs.com




Graphics: Purchased from [Whimsy Clips](#)

[Web Site](#)
[Facebook](#)
[Twitter](#)
[RSS](#)
[Google +](#)



Roll It



Write the Equation

X


=

Write the Sentence

_____ group of _____ = _____

Make It

Roll It



Write the Equation


<input type="text"/>	x	<input type="text"/>	=	<input type="text"/>
----------------------	----------	----------------------	----------	----------------------

Write the Sentence

_____ group of _____ = _____

Make It

Roll It



Write the Equation


$$\square \times \square = \square$$

Write the Sentence

_____ group of _____ = _____

Make It

Roll It



Write the Equation


$$\square \times \square = \square$$

Write the Sentence

_____ group of _____ = _____

Make It

Roll It



Write the Equation


$$\square \times \square = \square$$

Write the Sentence

_____ group of _____ = _____

Make It

Roll It



Write the Equation


$$\square \times \square = \square$$

Write the Sentence

_____ group of _____ = _____

Make It

Roll It



Write the Equation


<input type="text"/>	x	<input type="text"/>	=	<input type="text"/>
----------------------	----------	----------------------	----------	----------------------

Write the Sentence

_____ group of _____ = _____

Make It

Roll It



Write the Equation


$$\square \times \square = \square$$

Write the Sentence

_____ group of _____ = _____

Make It

Roll It



Write the Equation

$$\square \times \square = \square$$

Write the Sentence

_____ group of _____ = _____

Make It

Name: _____



Write the equations you build.

$$\underline{\quad} \times \underline{\quad} = \underline{\quad}$$

$$\underline{\quad} \times \underline{\quad} = \underline{\quad}$$

$$\underline{\quad} \times \underline{\quad} = \underline{\quad}$$

$$\underline{\quad} \times \underline{\quad} = \underline{\quad}$$

$$\underline{\quad} \times \underline{\quad} = \underline{\quad}$$

$$\underline{\quad} \times \underline{\quad} = \underline{\quad}$$

$$\underline{\quad} \times \underline{\quad} = \underline{\quad}$$

$$\underline{\quad} \times \underline{\quad} = \underline{\quad}$$

$$\underline{\quad} \times \underline{\quad} = \underline{\quad}$$

$$\underline{\quad} \times \underline{\quad} = \underline{\quad}$$

$$\underline{\quad} \times \underline{\quad} = \underline{\quad}$$

$$\underline{\quad} \times \underline{\quad} = \underline{\quad}$$

Name: _____



Write the equations you build..

$$\underline{\quad} \times \underline{\quad} = \underline{\quad}$$

$$\underline{\quad} \times \underline{\quad} = \underline{\quad}$$

$$\underline{\quad} \times \underline{\quad} = \underline{\quad}$$

$$\underline{\quad} \times \underline{\quad} = \underline{\quad}$$

$$\underline{\quad} \times \underline{\quad} = \underline{\quad}$$

$$\underline{\quad} \times \underline{\quad} = \underline{\quad}$$

$$\underline{\quad} \times \underline{\quad} = \underline{\quad}$$


$$\underline{\quad} \times \underline{\quad} = \underline{\quad}$$


$$\underline{\quad} \times \underline{\quad} = \underline{\quad}$$

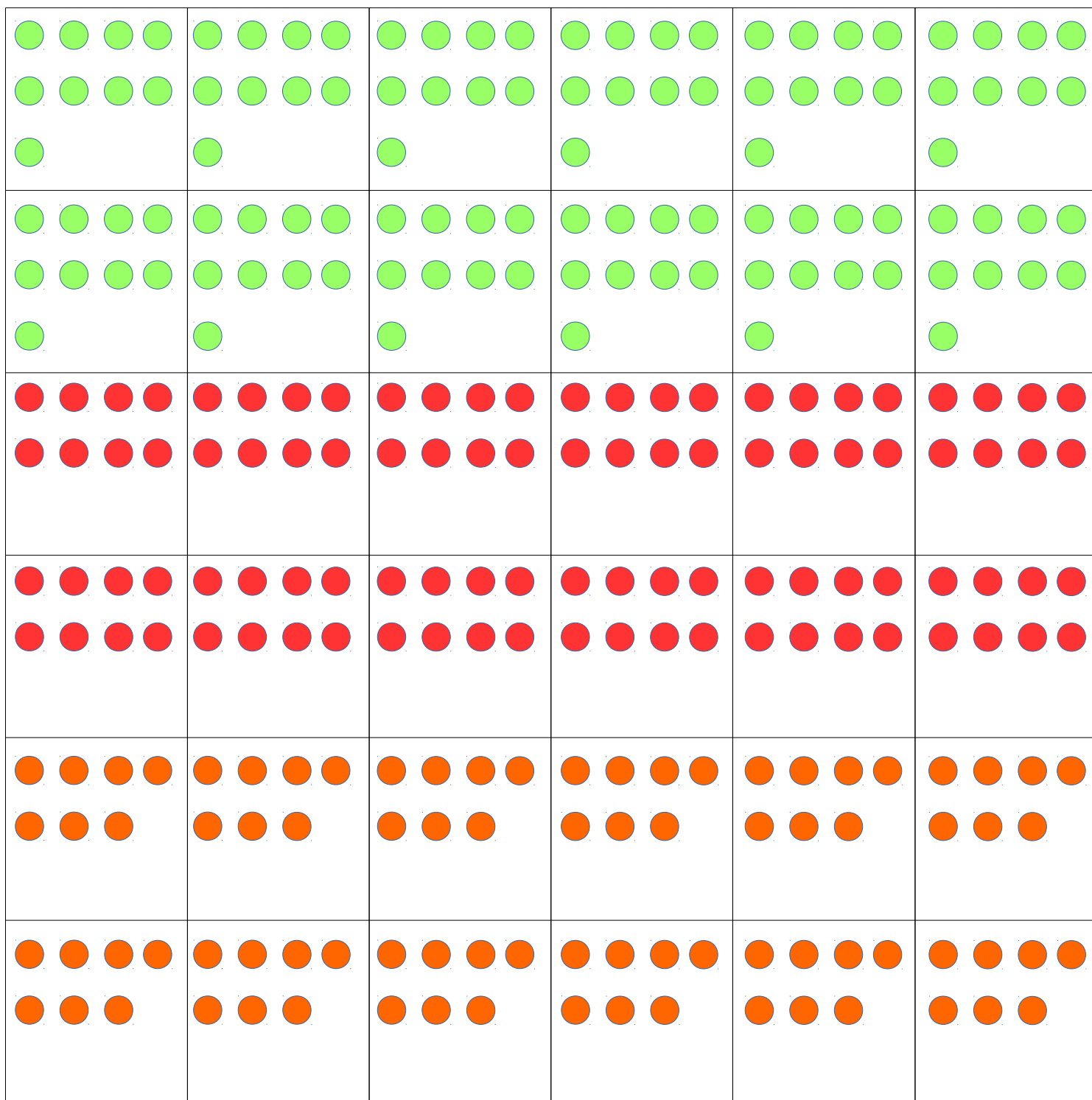
$$\underline{\quad} \times \underline{\quad} = \underline{\quad}$$

$$\underline{\quad} \times \underline{\quad} = \underline{\quad}$$

$$\underline{\quad} \times \underline{\quad} = \underline{\quad}$$







<div><div>●●●●</div><div>●●</div></div>	<div><div>●●●●</div><div>●●</div></div>	<div><div>●●●●</div><div>●●</div></div>	<div><div>●●●●</div><div>●●</div></div>	<div><div>●●●●</div><div>●●</div></div>	<div><div>●●●●</div><div>●●</div></div>
<div><div>●●●●</div><div>●●</div></div>	<div><div>●●●●</div><div>●●</div></div>	<div><div>●●●●</div><div>●●</div></div>	<div><div>●●●●</div><div>●●</div></div>	<div><div>●●●●</div><div>●●</div></div>	<div><div>●●●●</div><div>●●</div></div>
<div><div>●●●●</div><div>●</div></div>	<div><div>●●●●</div><div>●</div></div>	<div><div>●●●●</div><div>●</div></div>	<div><div>●●●●</div><div>●</div></div>	<div><div>●●●●</div><div>●</div></div>	<div><div>●●●●</div><div>●</div></div>
<div><div>●●●●</div><div>●</div></div>	<div><div>●●●●</div><div>●</div></div>	<div><div>●●●●</div><div>●</div></div>	<div><div>●●●●</div><div>●</div></div>	<div><div>●●●●</div><div>●</div></div>	<div><div>●●●●</div><div>●</div></div>
<div><div>●●●●</div></div>	<div><div>●●●●</div></div>	<div><div>●●●●</div></div>	<div><div>●●●●</div></div>	<div><div>●●●●</div></div>	<div><div>●●●●</div></div>
<div><div>●●●●</div></div>	<div><div>●●●●</div></div>	<div><div>●●●●</div></div>	<div><div>●●●●</div></div>	<div><div>●●●●</div></div>	<div><div>●●●●</div></div>

