

Ocean Daily Math Printable Sample

These files are copyright by 3Dinosaurs.com

Please DO

Download the files to your computers and print them off for personal or classroom use.
Give proper credit back to [3 Dinosaurs](#) when blogging about our files.

You May Not

Sell or host these files anywhere.
Alter my files in any way.
Print off and sell them to others. This includes selling new or used.
Share in anyway with other people.

Please remember this is about being Honest.

If you have questions please contact me. Please don't assume that it is okay to do something because it was not listed



Thanks 3 Dinosaurs

Graphics: Purchased from [Melonheadz Illustrations](#)




Created by Cassie @ 3Dinosaurs.com

Ocean Daily Math

Name: _____

Created by Cassie @ 3Dinosaurs.com



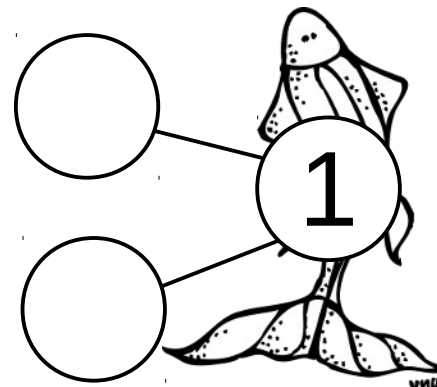
Make 1 tally marker.

Color in the ten frames to match today's number.

Fill in how many tens and ones for today's number.

Tens	Ones

Fill in the number bonds and complete the math facts.




$$\begin{array}{rcl} \underline{\quad} & + & \underline{\quad} = 1 \\ \underline{\quad} & + & \underline{\quad} = 1 \\ 1 & - & \underline{\quad} = \underline{\quad} \\ 1 & - & \underline{\quad} = \underline{\quad} \end{array}$$

Ocean Daily Math

Name: _____

Created by Cassie @ 3Dinosaurs.com





Make 2 tally markers.

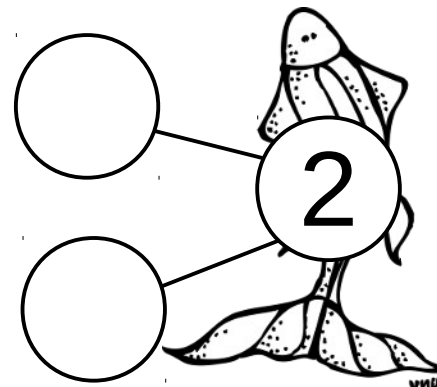
Color in the ten frames to match today's number.

--	--	--	--	--

Fill in how many tens and ones for today's number.

Tens	Ones
	

Fill in the number bonds and complete the math facts.



$$\underline{\quad} + \underline{\quad} = 2$$

$$\underline{\quad} + \underline{\quad} = 2$$


$$2 - \underline{\quad} = \underline{\quad}$$

$$2 - \underline{\quad} = \underline{\quad}$$

Ocean Daily Math

Name: _____



Created by Cassie @ 3Dinosaurs.com




Make 3 tally markers.

Color in the ten frames to match today's number.

Fill in how many tens and ones for today's number.

Tens	Ones
	

Fill in the number bonds and complete the math facts.




$$\begin{array}{rcl} \underline{\quad} & + & \underline{\quad} = 3 \\ \underline{\quad} & + & \underline{\quad} = 3 \\ 3 - & \underline{\quad} & = \underline{\quad} \\ 3 - & \underline{\quad} & = \underline{\quad} \end{array}$$

Ocean Daily Math

Name: _____



Created by Cassie @ 3Dinosaurs.com



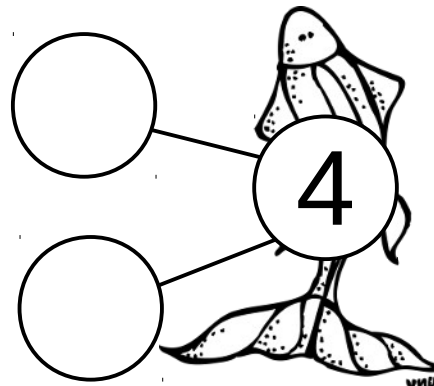
Make 4 tally markers.

Color in the ten frames to match today's number.

Fill in how many tens and ones for today's number.

Tens	Ones
	

Fill in the number bonds and complete the math facts.




$$\begin{array}{rcl} \underline{\quad} & + & \underline{\quad} = 4 \\ \underline{\quad} & + & \underline{\quad} = 4 \\ 4 - & \underline{\quad} & = \underline{\quad} \\ 4 - & \underline{\quad} & = \underline{\quad} \end{array}$$

Ocean Daily Math

Name: _____



Created by Cassie @ 3Dinosaurs.com




Make 5 tally markers.

Color in the ten frames to match today's number.

Fill in how many tens and ones for today's number.

Tens	Ones
	

Fill in the number bonds and complete the math facts.



$$\begin{array}{rcl} \underline{\quad} & + & \underline{\quad} = 5 \\ \underline{\quad} & + & \underline{\quad} = 5 \\ 5 - & \underline{\quad} & = \underline{\quad} \\ 5 - & \underline{\quad} & = \underline{\quad} \end{array}$$