

Ocean Themed Addition

These printables are provided *FREE* of charge. Please do share my printables. But please remember that all of my printables are for personal use. You cannot claim these printables or sell them as your own. All the printables and pictures are the property of 3 Dinosaurs.

Please DO

Download the files to your computers and print them off for personal use.
Direct people to the blog or site when sharing with others.
Give proper credit back to 3 Dinosaurs when blogging about our files.

Please Do Not

Link directly to the pdf file.
Alter my files in any way.
Store them on your website in any format.
Seek to use these to drive traffic to your site or sell them in any way.
Print off and sell them to others.

Please remember this is about being Honest.

I reserve the right to change this policy at any time.

[Web Site](#)
[Facebook](#)
[Twitter](#)
[RSS](#)
[Google +](#)

Thanks 3 Dinosaurs



Graphics: Purchased from [Melonheadz Illustrations](#)
and [Whimsy Clips](#)

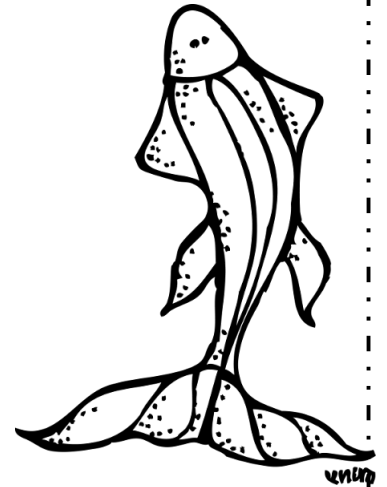
Created by Cassie @ 3Dinosaurs.com

Ocean Math Questions

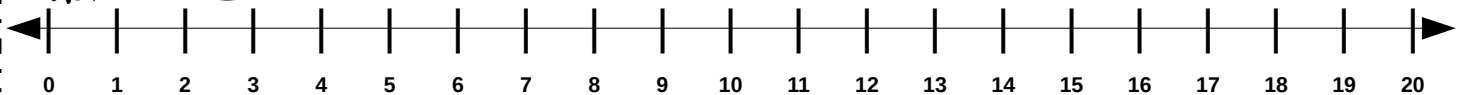

Answer the following questions. Show how you got the answer.



4 red and 5 blue fish are swimming. How many fish are swimming? _____



There are 8 turtles swimming together. 5 more turtles join them. How many turtles are there?

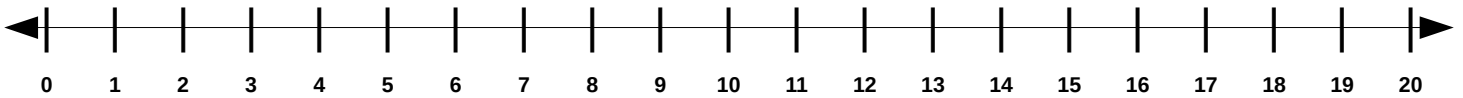
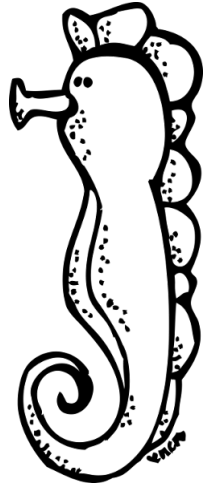


Ocean Math Questions

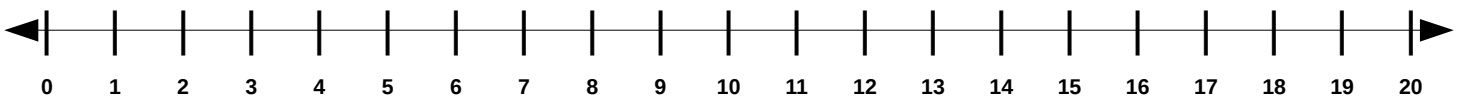

Answer the following questions. Show how you got the answer.



There are 12 seahorses on the seaweed.
6 more seahorse join them. How many
seahorses are there? _____



Two pods of dolphins are swimming together.
Each pod has 7 dolphins How many dolphins
are there? _____




Ocean Math Questions

Answer the following questions. Show how you got the answer.



7 sharks are swimming to the right. 8 sharks are swimming to the left. How many sharks are there? _____



6 blue jellyfish and 7 red jellyfish are swimming together. How many jellyfish are there? _____

