

Pirate Treasure Hands-on Sorting Division

These printables are provided *FREE* of charge. Please do share my printables. But please remember that all of my printables are for personal use. You cannot claim these printables or sell them as your own. All the printables and pictures are the property of 3 Dinosaurs.

Please DO

Download the files to your computers and print them off for personal use.
Direct people to the blog or site when sharing with others.
Give proper credit back to 3 Dinosaurs when blogging about our files.

Please Do Not

Link directly to the pdf file.
Alter my files in any way.
Store them on your website in any format.
Seek to use these to drive traffic to your site or sell them in any way.
Print off and sell them to others.

Please remember this is about being Honest.

I reserve the right to change this policy at any time.

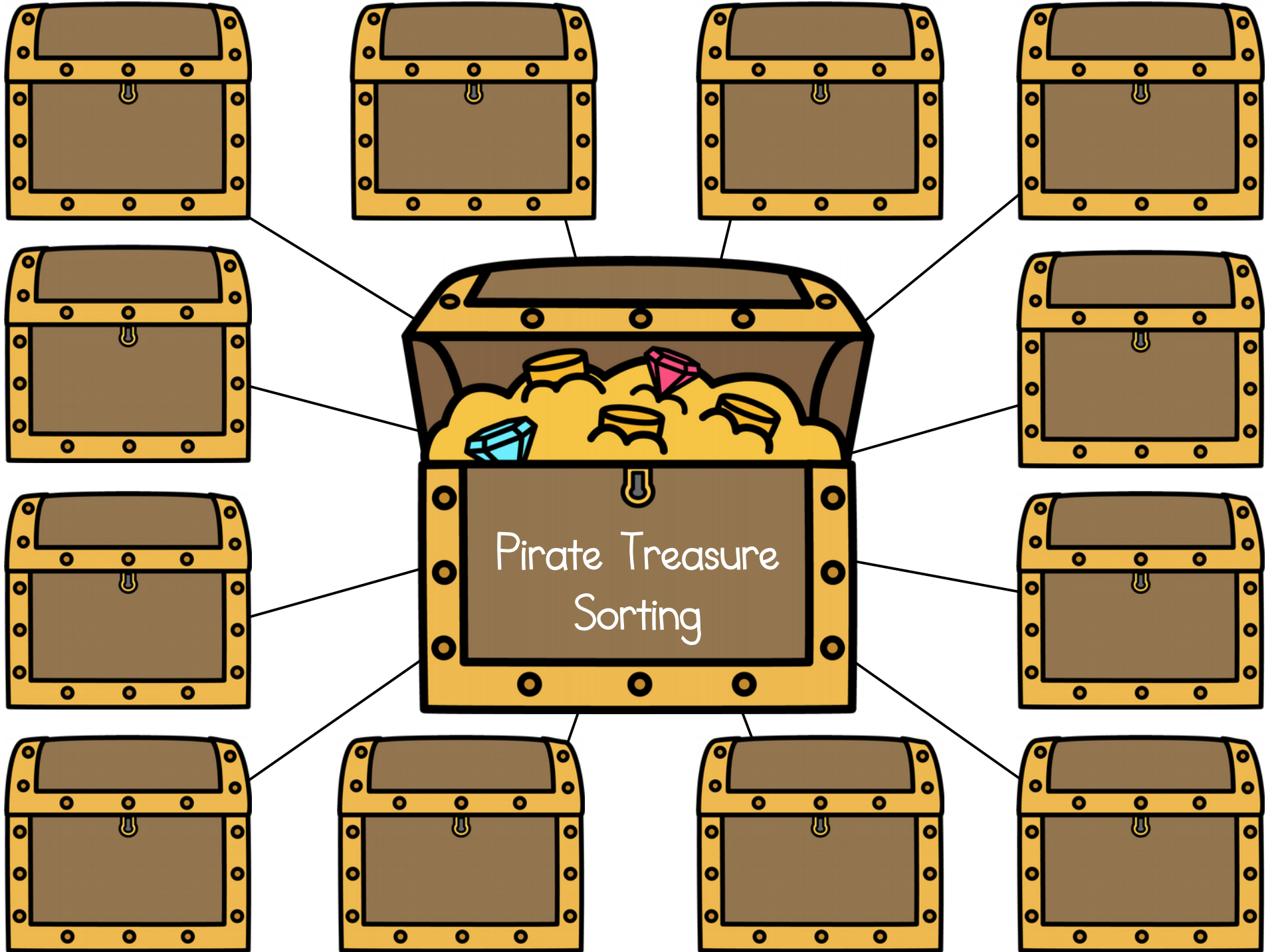


Graphics: Purchased from [Melonheadz Illustrations](#) & [Scrappin Doodles](#)
& [Whimsy Clips](#)

Thanks 3 Dinosaurs



Created by Cassie @ 3Dinosaurs.com




Pirate Treasure Sorting

Name: _____

Use the task cards to fill out the information.

#1 _____ ÷ _____ = _____	#7 _____ ÷ _____ = _____
#2 _____ ÷ _____ = _____	#8 _____ ÷ _____ = _____
#3 _____ ÷ _____ = _____	#9 _____ ÷ _____ = _____
#4 _____ ÷ _____ = _____	#10 _____ ÷ _____ = _____
#5 _____ ÷ _____ = _____	#11 _____ ÷ _____ = _____
#6 _____ ÷ _____ = _____	#12 _____ ÷ _____ = _____



Set #1

1

The pirate wants to put 5 gems in each chest. He has 25 gems. How many chests can he put them in?

Created by Cassie @ 3Dinosaurs.com

Set #1

2

The pirate wants to put 2 gems in each chest. He has 24 gems. How many chests can he put them in?

Created by Cassie @ 3Dinosaurs.com

Set #1

3

The pirate wants to put 4 gems in each chest. He has 32 gems. How many chests can he put them in?

Created by Cassie @ 3Dinosaurs.com

Set #1

4

The pirate wants to put 7 gems in each chest. He has 56 gems. How many chests can he put them in?

Created by Cassie @ 3Dinosaurs.com

Set #1

5

The pirate wants to put 8 gems in each chest. He has 72 gems. How many chests can he put them in?

Created by Cassie @ 3Dinosaurs.com

Set #1

6

The pirate wants to put 3 gems in each chest. He has 27 gems. How many chests can he put them in?

Created by Cassie @ 3Dinosaurs.com

Set #1

7

The pirate wants to put 5 gems in each chest. He has 50 gems. How many chests can he put them in?

Created by Cassie @ 3Dinosaurs.com

Set #1

8

The pirate wants to put 11 gems in each chest. He has 44 gems. How many chests can he put them in?

Created by Cassie @ 3Dinosaurs.com

Set #1

9

The pirate wants to put 6 gems in each chest. He has 36 gems. How many chests can he put them in?

Created by Cassie @ 3Dinosaurs.com

Set #1

10

The pirate wants to put 7 gems in each chest. He has 49 gems. How many chests can he put them in?

Created by Cassie @ 3Dinosaurs.com

Set #1

11

The pirate wants to put 8 gems in each chest. He has 24 gems. How many chests can he put them in?

Created by Cassie @ 3Dinosaurs.com

Set #1

12

The pirate wants to put 11 gems in each chest. He has 22 gems. How many chests can he put them in?

Created by Cassie @ 3Dinosaurs.com

Set #2

1

The pirate wants to put 9 gems in each chest. He has 63 gems. How many chests can he them put them in?

Created by Cassie @ 3Dinosaurs.com

Set #2

2

The pirate wants to put 12 gems in each chest. He has 48 gems. How many chests can he them put them in?

Created by Cassie @ 3Dinosaurs.com

Set #2

3

The pirate wants to put 1 gems in each chest. He has 8 gems. How many chests can he them put them in?

Created by Cassie @ 3Dinosaurs.com

Set #2

4

The pirate wants to put 4 gems in each chest. He has 24 gems. How many chests can he them put them in?

Created by Cassie @ 3Dinosaurs.com

Set #2

5

The pirate wants to put 8 gems in each chest. He has 32 gems. How many chests can he them put them in?

Created by Cassie @ 3Dinosaurs.com

Set #2

6

The pirate wants to put 11 gems in each chest. He has 33 gems. How many chests can he them put them in?

Created by Cassie @ 3Dinosaurs.com

Set #2

7

The pirate wants to put 7 gems in each chest. He has 35 gems. How many chests can he put them in?

Created by Cassie @ 3Dinosaurs.com

Set #2

8

The pirate wants to put 2 gems in each chest. He has 18 gems. How many chests can he put them in?

Created by Cassie @ 3Dinosaurs.com

Set #2

9

The pirate wants to put 5 gems in each chest. He has 20 gems. How many chests can he put them in?

Created by Cassie @ 3Dinosaurs.com

Set #2

10

The pirate wants to put 6 gems in each chest. He has 42 gems. How many chests can he put them in?

Created by Cassie @ 3Dinosaurs.com

Set #2

11

The pirate wants to put 3 gems in each chest. He has 15 gems. How many chests can he put them in?

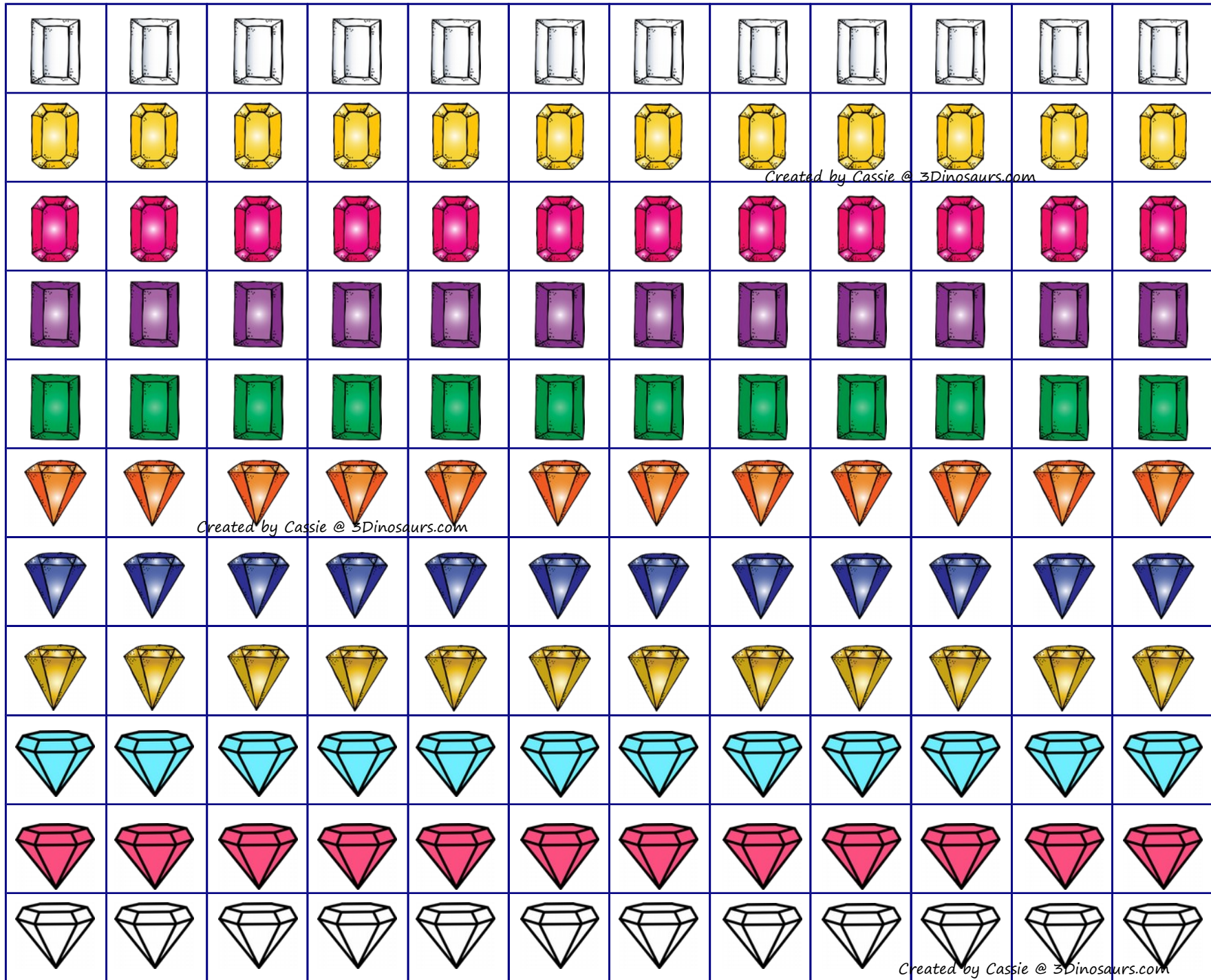
Created by Cassie @ 3Dinosaurs.com

Set #2

12

The pirate wants to put 8 gems in each chest. He has 48 gems. How many chests can he put them in?

Created by Cassie @ 3Dinosaurs.com



Created by Cassie @ 3Dinosaurs.com

Created by Cassie @ 3Dinosaurs.com

Created by Cassie @ 3Dinosaurs.com

Use these gems with the treasure chests