

# Pumpkin Themed Daily Math

These files are copyright by 3Dinosaurs.com

## Please DO

Download the files to your computers and print them off for personal or classroom use.  
Give proper credit back to [3 Dinosaurs](#) when blogging about our files.

## You May Not

Sell or host these files anywhere.  
Alter my files in any way.  
Print off and sell them to others. This includes selling new or used.  
Share in anyway with other people.

Please remember this is about being Honest.

If you have questions please contact me. Please don't assume that it is okay to do something because it was not listed

## Thanks 3 Dinosaurs



# Pumpkin Daily Math






Name: \_\_\_\_\_

Created by Cassie @ 3Dinosaurs.com





Make 1 tally marker.

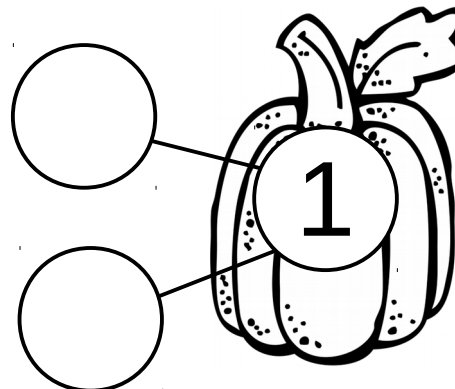
Color the pumpkin's that add up to 1.



Fill in how many tens and ones for today's number.

Tens	Ones
	

Fill in the number bonds and complete the math facts.



$$\underline{\quad} + \underline{\quad} = 1$$

$$\underline{\quad} + \underline{\quad} = 1$$

$$1 - \underline{\quad} = \underline{\quad}$$

$$1 - \underline{\quad} = \underline{\quad}$$

# Pumpkin Daily Math

Name: \_\_\_\_\_





Created by Cassie @ 3Dinosaurs.com





2

Make 2 tally markers.


Color the pumpkin's that add up to 2.



Fill in how many tens and ones for today's number.

Tens	Ones
	

Fill in the number bonds and complete the math facts.



$$\underline{\quad} + \underline{\quad} = 2$$

$$\underline{\quad} + \underline{\quad} = 2$$

$$2 - \underline{\quad} = \underline{\quad}$$

$$2 - \underline{\quad} = \underline{\quad}$$

# Pumpkin Daily Math






Name: \_\_\_\_\_

Created by Cassie @ 3Dinosaurs.com



Make 3 tally markers.


Color the pumpkin's that add up to 3.



Fill in how many tens and ones for today's number.

Tens	Ones

Fill in the number bonds and complete the math facts.



$$\begin{array}{rcl} \underline{\quad} & + & \underline{\quad} = 3 \\ \underline{\quad} & + & \underline{\quad} = 3 \\ 3 & - & \underline{\quad} = \underline{\quad} \\ 3 & - & \underline{\quad} = \underline{\quad} \end{array}$$

# Pumpkin Daily Math






Name: \_\_\_\_\_

Created by Cassie @ 3Dinosaurs.com





Make 4 tally markers.


Color the pumpkin's that add up to 4.



Fill in how many tens and ones for today's number.

Tens	Ones
	

Fill in the number bonds and complete the math facts.



$$\underline{\quad} + \underline{\quad} = 4$$

$$\underline{\quad} + \underline{\quad} = 4$$

$$4 - \underline{\quad} = \underline{\quad}$$

$$4 - \underline{\quad} = \underline{\quad}$$

# Pumpkin Daily Math






Name: \_\_\_\_\_

Created by Cassie @ 3Dinosaurs.com



Make 5 tally markers.

Color the pumpkin's that add up to 6.



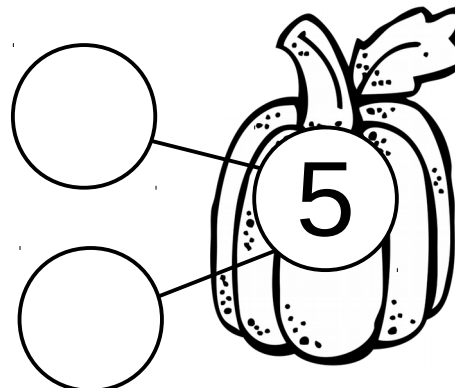
Fill in how many tens and ones for today's number.

**Tens**

**Ones**



Fill in the number bonds and complete the math facts.



$$\underline{\quad} + \underline{\quad} = 5$$

$$\underline{\quad} + \underline{\quad} = 5$$

$$5 - \underline{\quad} = \underline{\quad}$$

$$5 - \underline{\quad} = \underline{\quad}$$