

Pumpkin Themed Daily Math Sample

These files are copyright by 3Dinosaurs.com

Please DO

Download the files to your computers and print them off for personal or classroom use.
Give proper credit back to [3 Dinosaurs](#) when blogging about our files.

You May Not

Sell or host these files anywhere.
Alter my files in any way.
Print off and sell them to others. This includes selling new or used.
Share in anyway with other people.

Please remember this is about being Honest.

If you have questions please contact me. Please don't assume that it is okay to do something because it was not listed


Thanks 3 Dinosaurs



Pumpkin Themed Daily Math

Name: _____

Created by Cassie @ 3Dinosaurs.com



Answer the following questions.

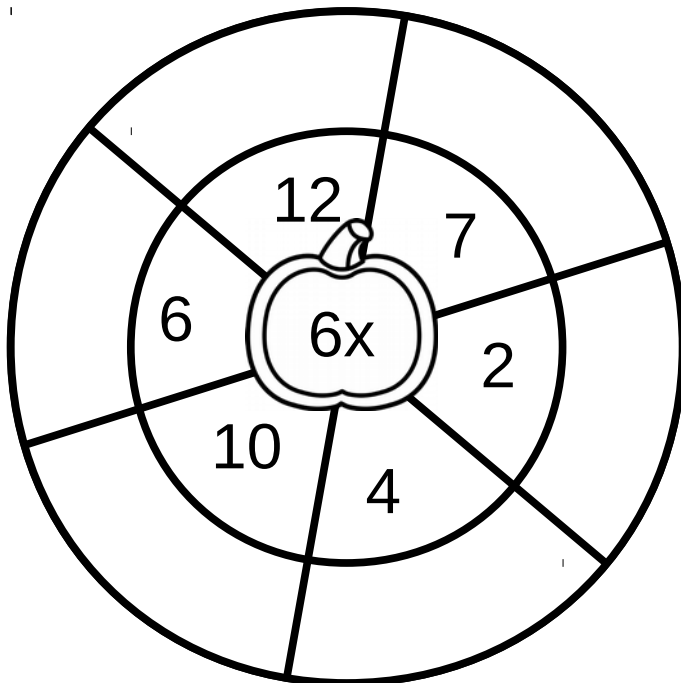
She arranged 12 pumpkins in 3 rows. Each row has the same number of pumpkins. How many pumpkins in each row? _____

$$\underline{\quad} \div \underline{\quad} = \underline{\quad}$$


12 people picked 24 pumpkins. They each picked the same number of pumpkins. How many did each person pick? _____

$$\underline{\quad} \div \underline{\quad} = \underline{\quad}$$

Complete the wheel below based on the center number.



Below is 8 groups of 9.



Redraw the groups as an array that show 8 rows of 9.

Write a matching math sentence: $\underline{\quad} \times \underline{\quad} = \underline{\quad}$