



Star Wars Math

Thanks for stopping by and downloading my Star Wars Math Set. Be sure to check out the [Star Wars Pack](#).

These printables are provided *FREE* of charge. Please do share my printables. But please remember that all of my printables are for personal use. You cannot claim these printables or sell them as your own. All the printables and pictures are the property of 3 Dinosaurs.

Please DO

- Download the files to your computers and print them off for personal use.
- Direct people to the blog or site when sharing with others.
- Give proper credit back to 3 Dinosaurs when blogging about our files.

You May Not

- Link directly to the pdf file.
- Alter my files in any way.
- Store them on your website in any format.
- Seek to use these to drive traffic to your site or sell them in any way.
- Print off and sell them to others.

Please remember this is about being Honest.

I reserve the right to change this policy at any time.

[Web Site](#)
[Facebook](#)
[Twitter](#)
[RSS](#)
[Google +](#)

Please read the [Terms of Use](#). If you have any questions please let me know.

Thanks!



Graphics purchased from [Scrappin Doodles](#)
and [Melonheadz Illustrations](#)


3Dinosaurs.com



Star Wars Daily Math

Name: _____



Created by Cassie @ 3Dinosaurs.com




Make 1 tally marker.

Color in the ten frames to match today's number.

Fill in how many tens and ones for today's number.

Tens	Ones
	

Fill in the number bonds and complete the math facts.



$$\begin{array}{rcl}
 \underline{\quad} & + & \underline{\quad} = 1 \\
 \underline{\quad} & + & \underline{\quad} = 1 \\
 1 & - & \underline{\quad} = \underline{\quad} \\
 1 & - & \underline{\quad} = \underline{\quad}
 \end{array}$$

Star Wars Daily Math

Name: _____

Created by Cassie @ 3Dinosaurs.com





2

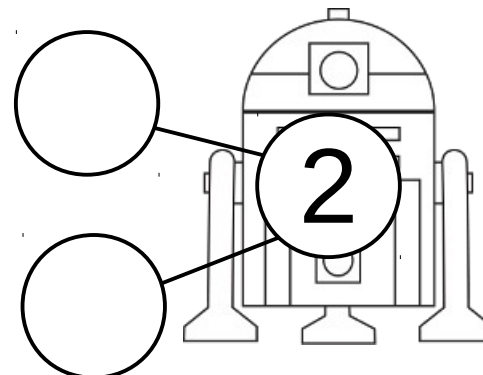
Make 2 tally markers.

Color in the ten frames to match today's number.

Fill in how many tens and ones for today's number.

Tens	Ones
	

Fill in the number bonds and complete the math facts.



$$\begin{array}{rcl}
 \underline{\quad} & + & \underline{\quad} = 2 \\
 \underline{\quad} & + & \underline{\quad} = 2 \\
 2 - & \underline{\quad} & = \underline{\quad} \\
 2 - & \underline{\quad} & = \underline{\quad}
 \end{array}$$

Star Wars Daily Math

Name: _____



Created by Cassie @ 3Dinosaurs.com



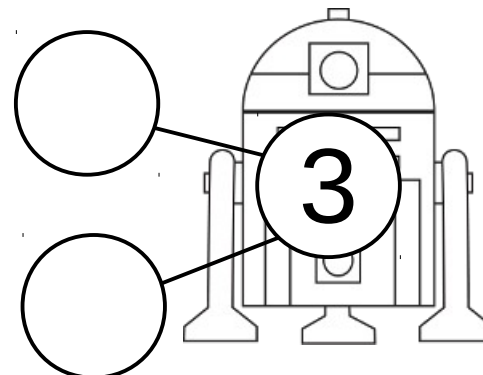
Make 3 tally markers.

Color in the ten frames to match today's number.

Fill in how many tens and ones for today's number.

Tens	Ones
	

Fill in the number bonds and complete the math facts.

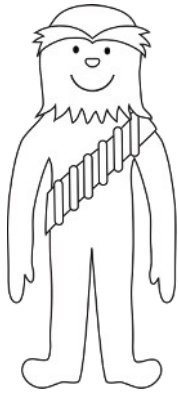


$$\begin{array}{rcl}
 \underline{\quad} & + & \underline{\quad} = 3 \\
 \underline{\quad} & + & \underline{\quad} = 3 \\
 3 - \underline{\quad} & = & \underline{\quad} \\
 3 - \underline{\quad} & = & \underline{\quad}
 \end{array}$$

Star Wars Daily Math

Name: _____

Created by Cassie @ 3Dinosaurs.com



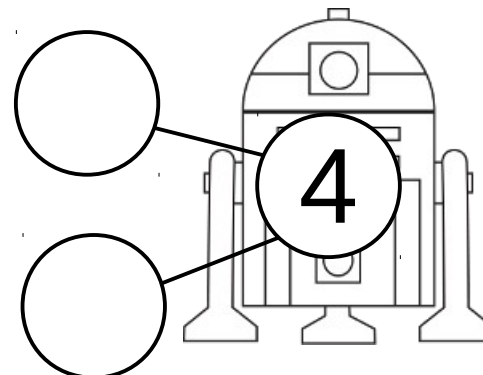
Make 4 tally markers.

Color in the ten frames to match today's number.

Fill in how many tens and ones for today's number.

Tens	Ones

Fill in the number bonds and complete the math facts.




$$\begin{array}{rcl} \underline{\quad} & + & \underline{\quad} = 4 \\ \underline{\quad} & + & \underline{\quad} = 4 \\ 4 - & & \underline{\quad} = \underline{\quad} \\ 4 - & & \underline{\quad} = \underline{\quad} \end{array}$$

Star Wars Daily Math

Name: _____

Created by Cassie @ 3Dinosaurs.com



Make 5 tally markers.


Color in the ten frames to match today's number.

--	--	--	--	--

Fill in how many tens and ones for today's number.

Tens	Ones

Fill in the number bonds and complete the math facts.



$$\underline{\quad} + \underline{\quad} = 5$$

$$\underline{\quad} + \underline{\quad} = 5$$

$$5 - \underline{\quad} = \underline{\quad}$$

$$5 - \underline{\quad} = \underline{\quad}$$

Star Wars Daily Math

Name: _____



Created by Cassie @ 3Dinosaurs.com



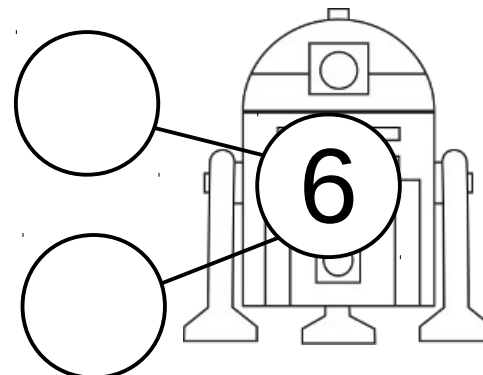
Make 6 tally markers.

Color in the ten frames to match today's number.

Fill in how many tens and ones for today's number.

Tens	Ones
	

Fill in the number bonds and complete the math facts.




$$\begin{array}{rcl}
 \underline{\quad} & + & \underline{\quad} = 6 \\
 \underline{\quad} & + & \underline{\quad} = 6 \\
 6 - & \underline{\quad} & = \underline{\quad} \\
 6 - & \underline{\quad} & = \underline{\quad}
 \end{array}$$

Star Wars Daily Math

Name: _____



Created by Cassie @ 3Dinosaurs.com




Make 7 tally markers.

Color in the ten frames to match today's number.

Fill in how many tens and ones for today's number.

Tens	Ones
	

Fill in the number bonds and complete the math facts.



$$\begin{array}{rcl} \underline{\quad} & + & \underline{\quad} = 7 \\ \underline{\quad} & + & \underline{\quad} = 7 \\ \underline{7} & - & \underline{\quad} = \underline{\quad} \\ 7 & - & \underline{\quad} = \underline{\quad} \end{array}$$

Star Wars Daily Math

Name: _____



Created by Cassie @ 3Dinosaurs.com



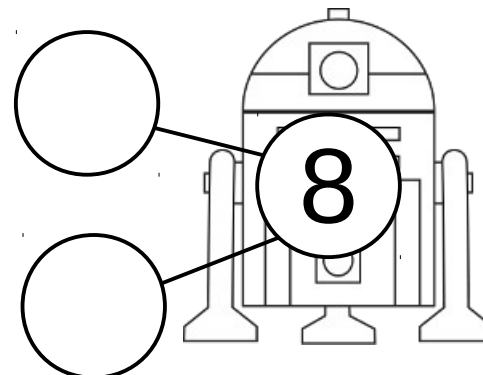
Make 8 tally markers.

Color in the ten frames to match today's number.

Fill in how many tens and ones for today's number.

Tens	Ones
	

Fill in the number bonds and complete the math facts.

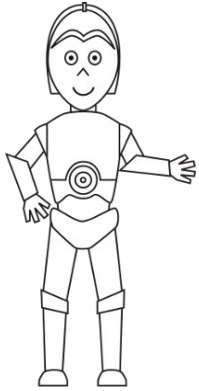


$$\begin{array}{rcl}
 \underline{\quad} & + & \underline{\quad} = 8 \\
 \underline{\quad} & + & \underline{\quad} = 8 \\
 8 & - & \underline{\quad} = \underline{\quad} \\
 8 & - & \underline{\quad} = \underline{\quad}
 \end{array}$$

Star Wars Daily Math

Name: _____

Created by Cassie @ 3Dinosaurs.com




Make 9 tally markers.

Color in the ten frames to match today's number.

Fill in how many tens and ones for today's number.

Tens	Ones

Fill in the number bonds and complete the math facts.



$$\begin{array}{rcl}
 \underline{\quad} & + & \underline{\quad} = 9 \\
 \underline{\quad} & + & \underline{\quad} = 9 \\
 9 - \underline{\quad} & = & \underline{\quad} \\
 9 - \underline{\quad} & = & \underline{\quad}
 \end{array}$$

Star Wars Daily Math

Name: _____



Created by Cassie @ 3Dinosaurs.com




Make 10 tally markers.

Color in the ten frames to match today's number.

Fill in how many tens and ones for today's number.

Tens	Ones
	

Fill in the number bonds and complete the math facts.




$$\begin{array}{rcl} \underline{\quad} & + & \underline{\quad} = 10 \\ \underline{\quad} & + & \underline{\quad} = 10 \\ 10 & - & \underline{\quad} = \underline{\quad} \\ 10 & - & \underline{\quad} = \underline{\quad} \end{array}$$

Star Wars Daily Math

Name: _____



Created by Cassie @ 3Dinosaurs.com




Make 11 tally markers.

Color in the ten frames to match today's number.

Fill in how many tens and ones for today's number.

Tens	Ones
	

Fill in the number bonds and complete the math facts.

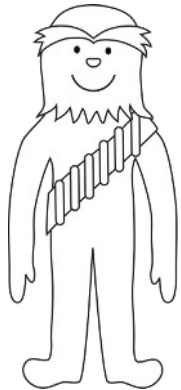


$$\begin{array}{rcl} \underline{\quad} & + & \underline{\quad} = 11 \\ \underline{\quad} & + & \underline{\quad} = 11 \\ 11 & - & \underline{\quad} = \underline{\quad} \\ 11 & - & \underline{\quad} = \underline{\quad} \end{array}$$

Star Wars Daily Math

Name: _____



Created by Cassie @ 3Dinosaurs.com




Make 12 tally markers.

Color in the ten frames to match today's number.

Fill in how many tens and ones for today's number.

Tens	Ones
	

Fill in the number bonds and complete the math facts.




$$\begin{array}{rcl} \underline{\quad} & + & \underline{\quad} = 12 \\ \underline{\quad} & + & \underline{\quad} = 12 \\ 12 & - & \underline{\quad} = \underline{\quad} \\ 12 & - & \underline{\quad} = \underline{\quad} \end{array}$$

Star Wars Daily Math

Name: _____

Created by Cassie @ 3Dinosaurs.com




Make 13 tally markers.

Color in the ten frames to match today's number.

Fill in how many tens and ones for today's number.

Tens	Ones

Fill in the number bonds and complete the math facts.



$$\underline{\quad} + \underline{\quad} = 13$$

$$\underline{\quad} + \underline{\quad} = 13$$


$$13 - \underline{\quad} = \underline{\quad}$$

$$13 - \underline{\quad} = \underline{\quad}$$

Star Wars Daily Math

Name: _____



Created by Cassie @ 3Dinosaurs.com




Make 14 tally markers.

Color in the ten frames to match today's number.

Fill in how many tens and ones for today's number.

Tens	Ones
	

Fill in the number bonds and complete the math facts.




$$\begin{array}{rcl} \underline{\quad} & + & \underline{\quad} = 14 \\ \underline{\quad} & + & \underline{\quad} = 14 \\ 14 & - & \underline{\quad} = \underline{\quad} \\ 14 & - & \underline{\quad} = \underline{\quad} \end{array}$$

Star Wars Daily Math

Name: _____

Created by Cassie @ 3Dinosaurs.com



15


Make 15 tally markers.

Color in the ten frames to match today's number.

Fill in how many tens and ones for today's number.

Tens	Ones

Fill in the number bonds and complete the math facts.

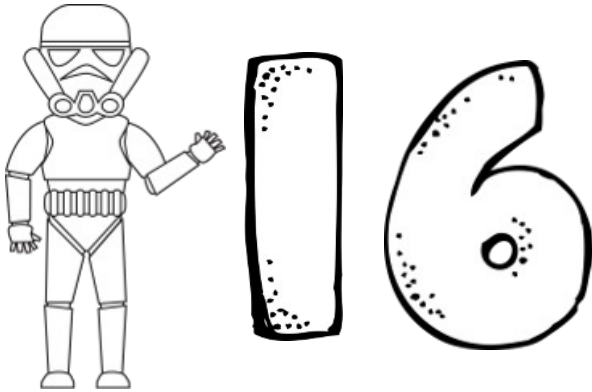


$$\begin{array}{rcl} \underline{\quad} & + & \underline{\quad} = 15 \\ \underline{\quad} & + & \underline{\quad} = 15 \\ 15 & - & \underline{\quad} = \underline{\quad} \\ 15 & - & \underline{\quad} = \underline{\quad} \end{array}$$

Star Wars Daily Math

Name: _____



Created by Cassie @ 3Dinosaurs.com




Make 16 tally markers.

Color in the ten frames to match today's number.

Fill in how many tens and ones for today's number.

Tens	Ones
	

Fill in the number bonds and complete the math facts.

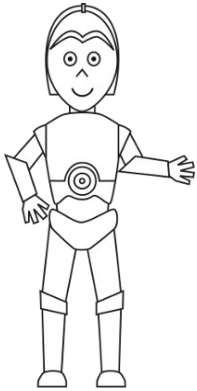


$$\begin{array}{rcl} \underline{\quad} & + & \underline{\quad} = 16 \\ \underline{\quad} & + & \underline{\quad} = 16 \\ 16 & - & \underline{\quad} = \underline{\quad} \\ 16 & - & \underline{\quad} = \underline{\quad} \end{array}$$

Star Wars Daily Math

Name: _____

Created by Cassie @ 3Dinosaurs.com




Make 17 tally markers.

Color in the ten frames to match today's number.

Fill in how many tens and ones for today's number.

Tens	Ones

Fill in the number bonds and complete the math facts.




$$\begin{array}{rcl} \underline{\quad} & + & \underline{\quad} = 17 \\ \underline{\quad} & + & \underline{\quad} = 17 \\ 17 & - & \underline{\quad} = \underline{\quad} \\ 17 & - & \underline{\quad} = \underline{\quad} \end{array}$$

Star Wars Daily Math

Name: _____



Created by Cassie @ 3Dinosaurs.com




Make 18 tally markers.

Color in the ten frames to match today's number.

Fill in how many tens and ones for today's number.

Tens	Ones
	

Fill in the number bonds and complete the math facts.

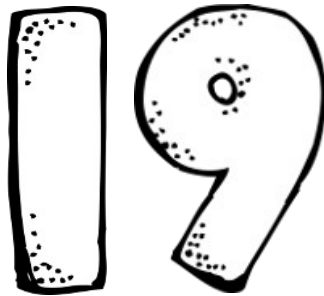



$$\begin{array}{rcl} \underline{\quad} & + & \underline{\quad} = 18 \\ \underline{\quad} & + & \underline{\quad} = 18 \\ 18 & - & \underline{\quad} = \underline{\quad} \\ 18 & - & \underline{\quad} = \underline{\quad} \end{array}$$

Star Wars Daily Math

Name: _____



Created by Cassie @ 3Dinosaurs.com




Make 19 tally markers.

Color in the ten frames to match today's number.

Fill in how many tens and ones for today's number.

Tens	Ones
	

Fill in the number bonds and complete the math facts.

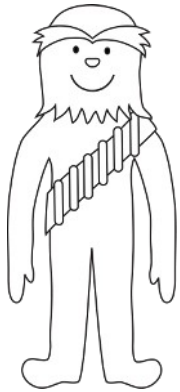


$$\begin{array}{rcl} \underline{\quad} & + & \underline{\quad} = 19 \\ \underline{\quad} & + & \underline{\quad} = 19 \\ 19 & - & \underline{\quad} = \underline{\quad} \\ 19 & - & \underline{\quad} = \underline{\quad} \end{array}$$

Star Wars Daily Math

Name: _____

Created by Cassie @ 3Dinosaurs.com



20

Make 20 tally markers.


Color in the ten frames to match today's number.

--	--	--	--	--

Fill in how many tens and ones for today's number.

Tens	Ones

Fill in the number bonds and complete the math facts.




$$\begin{array}{rcl} \underline{\quad} & + & \underline{\quad} = 20 \\ \underline{\quad} & + & \underline{\quad} = 20 \\ 20 & - & \underline{\quad} = \underline{\quad} \\ 20 & - & \underline{\quad} = \underline{\quad} \end{array}$$

Star Wars Daily Math

Name: _____

Created by Cassie @ 3Dinosaurs.com



21

Make 21 tally markers.


Color in the ten frames to match today's number.

--	--	--	--	--

Fill in how many tens and ones for today's number.

Tens	Ones

Fill in the number bonds and complete the math facts.



$$\begin{array}{rcl} \underline{\quad} & + & \underline{\quad} = 21 \\ \underline{\quad} & + & \underline{\quad} = 21 \\ 21 & - & \underline{\quad} = \underline{\quad} \\ 21 & - & \underline{\quad} = \underline{\quad} \end{array}$$

Star Wars Daily Math

Name: _____

Created by Cassie @ 3Dinosaurs.com





22

Make 22 tally markers.


Color in the ten frames to match today's number.

--	--	--	--	--

Fill in how many tens and ones for today's number.

Tens	Ones
	

Fill in the number bonds and complete the math facts.



$$\underline{\quad} + \underline{\quad} = 22$$

$$\underline{\quad} + \underline{\quad} = 22$$


$$22 - \underline{\quad} = \underline{\quad}$$

$$22 - \underline{\quad} = \underline{\quad}$$

Star Wars Daily Math

Name: _____

Created by Cassie @ 3Dinosaurs.com



23


Make 23 tally markers.

Color in the ten frames to match today's number.

Fill in how many tens and ones for today's number.

Tens	Ones

Fill in the number bonds and complete the math facts.



$$\begin{array}{rcl} \underline{\quad} & + & \underline{\quad} = 23 \\ \underline{\quad} & + & \underline{\quad} = 23 \\ 23 & - & \underline{\quad} = \underline{\quad} \\ 23 & - & \underline{\quad} = \underline{\quad} \end{array}$$

Star Wars Daily Math

Name: _____

Created by Cassie @ 3Dinosaurs.com





24


Make 24 tally markers.

Color in the ten frames to match today's number.

Fill in how many tens and ones for today's number.

Tens	Ones
	

Fill in the number bonds and complete the math facts.




$$\begin{array}{rcl} \underline{\quad} & + & \underline{\quad} = 24 \\ \underline{\quad} & + & \underline{\quad} = 24 \\ 24 & - & \underline{\quad} = \underline{\quad} \\ 24 & - & \underline{\quad} = \underline{\quad} \end{array}$$

Star Wars Daily Math

Name: _____

Created by Cassie @ 3Dinosaurs.com



25


Make 25 tally markers.

Color in the ten frames to match today's number.

Fill in how many tens and ones for today's number.

Tens	Ones

Fill in the number bonds and complete the math facts.



$$\begin{array}{rcl} \underline{\quad} & + & \underline{\quad} = 25 \\ \underline{\quad} & + & \underline{\quad} = 25 \\ 25 & - & \underline{\quad} = \underline{\quad} \\ 25 & - & \underline{\quad} = \underline{\quad} \end{array}$$

Star Wars Daily Math

Name: _____



Created by Cassie @ 3Dinosaurs.com




Make 26 tally markers.

Color in the ten frames to match today's number.

Fill in how many tens and ones for today's number.

Tens	Ones
	

Fill in the number bonds and complete the math facts.



$$\begin{array}{rcl} \underline{\quad} & + & \underline{\quad} = 26 \\ \underline{\quad} & + & \underline{\quad} = 26 \\ 26 & - & \underline{\quad} = \underline{\quad} \\ 26 & - & \underline{\quad} = \underline{\quad} \end{array}$$

Star Wars Daily Math

Name: _____

Created by Cassie @ 3Dinosaurs.com



27


Make 27 tally markers.

Color in the ten frames to match today's number.

Fill in how many tens and ones for today's number.

Tens	Ones

Fill in the number bonds and complete the math facts.

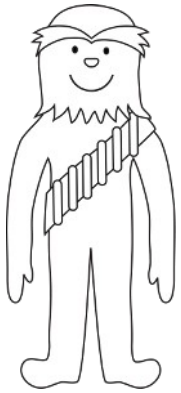


$$\begin{array}{rcl} \underline{\quad} & + & \underline{\quad} = 27 \\ \underline{\quad} & + & \underline{\quad} = 27 \\ 27 & - & \underline{\quad} = \underline{\quad} \\ 27 & - & \underline{\quad} = \underline{\quad} \end{array}$$

Star Wars Daily Math

Name: _____

Created by Cassie @ 3Dinosaurs.com





28


Make 28 tally markers.

Color in the ten frames to match today's number.

Fill in how many tens and ones for today's number.

Tens	Ones
	

Fill in the number bonds and complete the math facts.




$$\begin{array}{rcl} \underline{\quad} & + & \underline{\quad} = 28 \\ \underline{\quad} & + & \underline{\quad} = 28 \\ 28 & - & \underline{\quad} = \underline{\quad} \\ 28 & - & \underline{\quad} = \underline{\quad} \end{array}$$

Star Wars Daily Math

Name: _____

Created by Cassie @ 3Dinosaurs.com



29


Make 29 tally markers.

Color in the ten frames to match today's number.

Fill in how many tens and ones for today's number.

Tens	Ones

Fill in the number bonds and complete the math facts.



$$\begin{array}{rcl} \underline{\quad} & + & \underline{\quad} = 29 \\ \underline{\quad} & + & \underline{\quad} = 29 \\ 29 & - & \underline{\quad} = \underline{\quad} \\ 29 & - & \underline{\quad} = \underline{\quad} \end{array}$$

Star Wars Daily Math

Name: _____

Created by Cassie @ 3Dinosaurs.com



30

Make 30 tally markers.


Color in the ten frames to match today's number.

--	--	--	--	--

Fill in how many tens and ones for today's number.

Tens	Ones

Fill in the number bonds and complete the math facts.



$$\underline{\quad} + \underline{\quad} = 30$$

$$\underline{\quad} + \underline{\quad} = 30$$


$$30 - \underline{\quad} = \underline{\quad}$$

$$30 - \underline{\quad} = \underline{\quad}$$

Star Wars Daily Math

Name: _____



Created by Cassie @ 3Dinosaurs.com




Make 31 tally markers.

Color in the ten frames to match today's number.

Fill in how many tens and ones for today's number.

Tens	Ones
	

Fill in the number bonds and complete the math facts.



$$\begin{array}{rcl} \underline{\quad} & + & \underline{\quad} = 31 \\ \underline{\quad} & + & \underline{\quad} = 31 \\ 31 & - & \underline{\quad} = \underline{\quad} \\ 31 & - & \underline{\quad} = \underline{\quad} \end{array}$$