

Winter Themed Daily Math - Sample

These files are copyright by 3Dinosaurs.com

Please DO

Download the files to your computers and print them off for personal or classroom use.
Give proper credit back to [3 Dinosaurs](#) when blogging about our files.

You May Not

Sell or host these files anywhere.
Alter my files in any way.
Print off and sell them to others. This includes selling new or used.
Share in anyway with other people.

Please remember this is about being Honest.

If you have questions please contact me. Please don't assume that it is okay to do something because it was not listed

Thanks 3 Dinosaurs



Winter Themed Daily Math

Name: _____

Count by 2 to fill in the numbers.

Created by Cassie @ 3Dinosaurs.com



2											
---	--	--	--	--	--	--	--	--	--	--	--

Add the numbers.


$$2+2+2+2 = \underline{\quad}$$

$$2+2+2 = \underline{\quad}$$


$$2+2+2+2+2+2+2+2 = \underline{\quad}$$

$$2+2 = \underline{\quad}$$


Color the mittens that are multiples of 2.



Fill in the number bonds and complete the math facts.



$$\begin{array}{rcl} \underline{\quad} & \times & \underline{\quad} = \underline{\quad} \\ \underline{\quad} & \times & \underline{\quad} = \underline{\quad} \\ \underline{\quad} & \div & \underline{\quad} = \underline{\quad} \\ \underline{\quad} & \div & \underline{\quad} = \underline{\quad} \end{array}$$



$$\begin{array}{rcl} \underline{\quad} & \times & \underline{\quad} = \underline{\quad} \\ \underline{\quad} & \times & \underline{\quad} = \underline{\quad} \\ \underline{\quad} & \div & \underline{\quad} = \underline{\quad} \\ \underline{\quad} & \div & \underline{\quad} = \underline{\quad} \end{array}$$

Winter Themed Daily Math

Name: _____

Count by 3 to fill in the numbers.

Created by Cassie @ 3Dinosaurs.com



3											
---	--	--	--	--	--	--	--	--	--	--	--

Add the numbers.

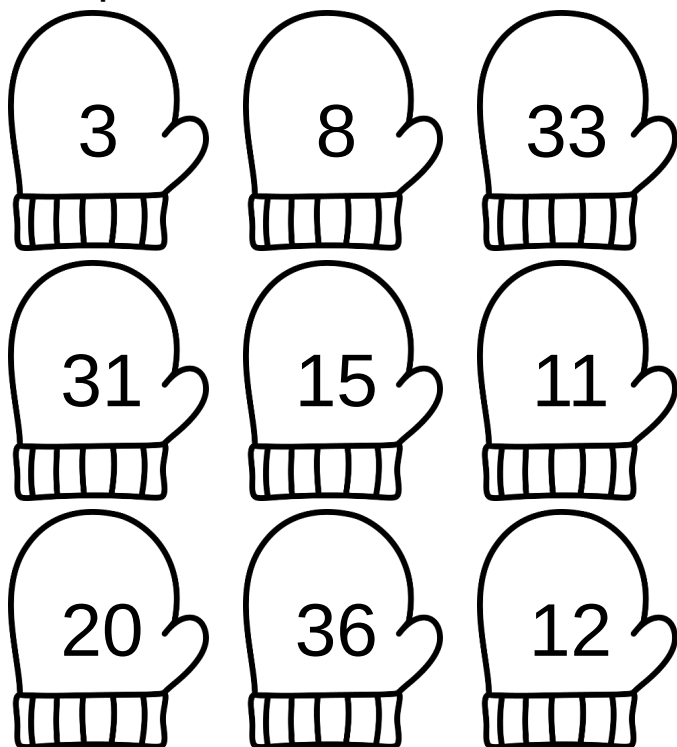
$3+3+3 = \underline{\quad}$

$3+3+3+3+3 = \underline{\quad}$


$3+3+3+3+3+3 = \underline{\quad}$

$3+3+3+3+3+3+3+3+3+3 = \underline{\quad}$


Color the mittens that are multiples of 3.



Fill in the number bonds and complete the math facts.



$$\begin{array}{rcl} \underline{\quad} & \times & \underline{\quad} = \underline{\quad} \\ \underline{\quad} & \times & \underline{\quad} = \underline{\quad} \\ \underline{\quad} & \div & \underline{\quad} = \underline{\quad} \\ \underline{\quad} & \div & \underline{\quad} = \underline{\quad} \end{array}$$



$$\begin{array}{rcl} \underline{\quad} & \times & \underline{\quad} = \underline{\quad} \\ \underline{\quad} & \times & \underline{\quad} = \underline{\quad} \\ \underline{\quad} & \div & \underline{\quad} = \underline{\quad} \\ \underline{\quad} & \div & \underline{\quad} = \underline{\quad} \end{array}$$