

APPLE Math Pack Part 2

Thanks for stopping by and downloading my Apple Math Pack. Be sure to download Math Part 1, the original Apple & Tot Pack.

These printables are provided *FREE* of charge. Please do share my printables. But please remember that all of my printables are for personal use. You cannot claim these printables or sell them as your own. All the printables and pictures are the property of 3 Dinosaurs.

Please DO

- Download the files to your computers and print them off for personal use.
- Direct people to the blog or site when sharing with others.
- Give proper credit back to 3 Dinosaurs when blogging about our files.

You May Not

- Link directly to the pdf file.
- Alter my files in any way.
- Store them on your website in any format.
- Seek to use these to drive traffic to your site or sell them in any way.
- Print off and sell them to others.

Please remember this is about being Honest.

I reserve the right to change this policy at any time.

Please read the [Terms of Use](#). If you have any questions please let me know.

Thanks!

3Dinosaurs.com



Graphics: Purchased from [Melonheadz Illustrations](#)












Apple Math Pack Index

Part 1

3-5 – Basic Addition & Subtraction with apples
6 – Subtraction Matching
7-10 – Roll & Count (1-5, 1-10, 1-20)
11 – Tally the Apples
12-17 – Roll & Count Question Math (Addition, Multiplication, Division, Subtraction)
18-19 – Word Math Problems
20-21 – Fill In the Missing Numbers
22-23 – Fill in the Missing Numbers 100 Charts
24 – Color Addition
25 – Color Multiplication
26 – Color the Larger Amount
27 – Measure the Apples
28 – What Place Am I?
29 – Tally the Apples & Questions
30-31 – Addition 3 Part Cards
32-33 – Multiplication 3 Part Cards
34 – Color Even & Odd
35 – Tally the Coins
36 – Skip Counting
37-38 – Count & Color
39 – Apple Basket Adding
40-45 – Spinning Wheel Math (Addition, Subtraction, Multiplication)
46 – Ways to Add to Ten
47 – Counting by 10s
48-51 – Number Matching

Part 2

3 – Apple Count & Number Matching
4 – Apple number Line
5 - Apple Pie Roll & Cover
6 – Roll & Cover + 5
7 – Roll & Cover Multiplication
8 – Roll & Cover & Subtract 1
9-10 – Apple Math Sorting
11 – Ways to Add to Ten
12 – Matching Numbers & Words



1

2

3


4

5


6



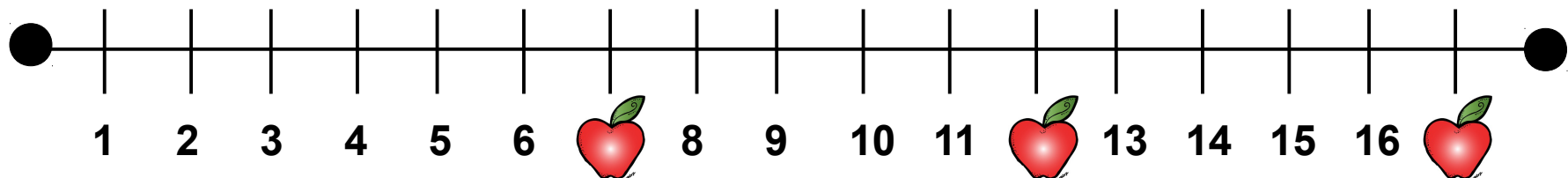
Apple Number Line



What numbers are the apples covering? _____



What numbers are the apples covering? _____

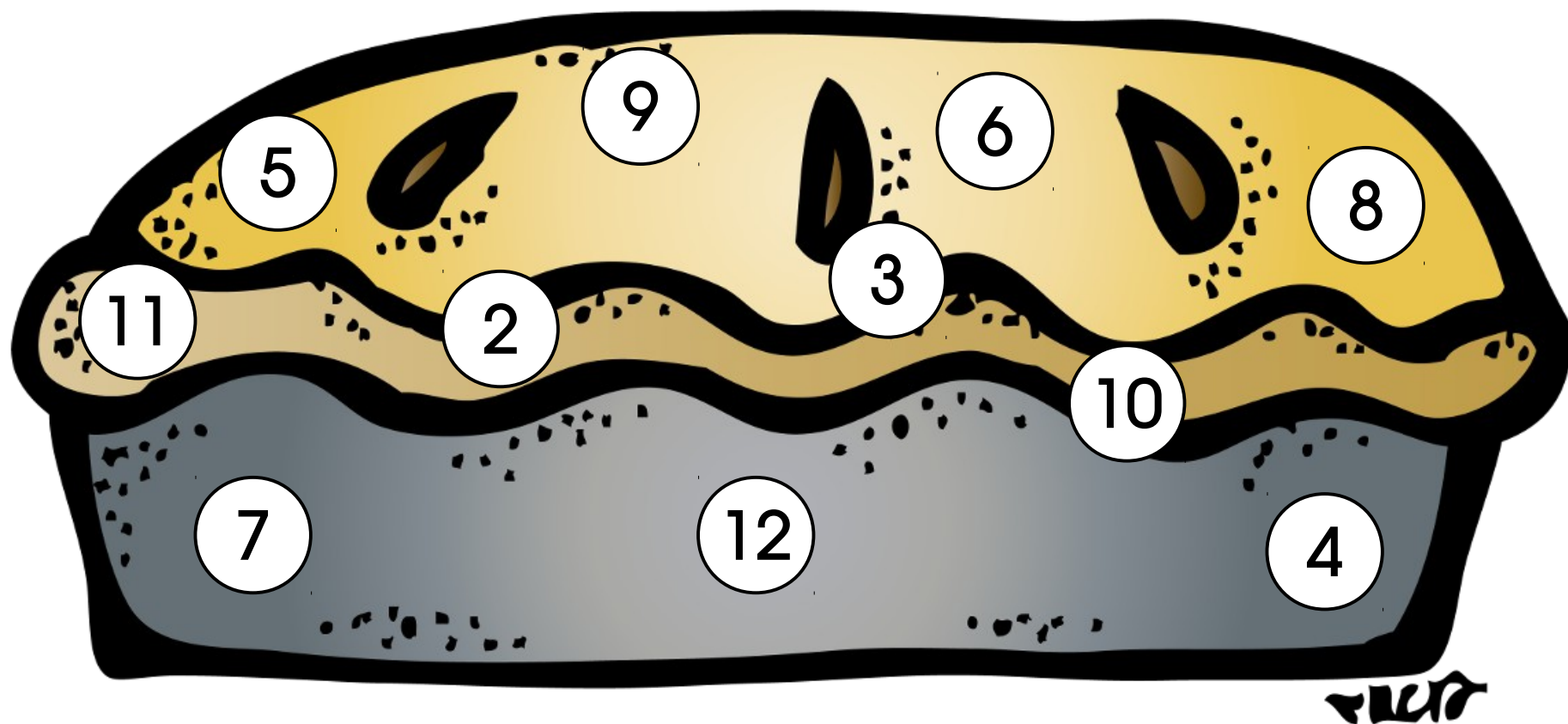


What numbers are the apples covering? _____

Apple Pie Roll & Cover

How to Play:


Roll two dice and add them together. Cover the answer on the apple pie below.



Roll & Cover Apple & Add 5

How to Play:

Roll two dice and add them together. Take the total and add 5 more and cover the answer.



$$\underline{\quad} + \underline{\quad} + 5 = \underline{\quad}$$

$$\underline{\quad} + \underline{\quad} + 5 = \underline{\quad}$$

$$\underline{\quad} + \underline{\quad} + 5 = \underline{\quad}$$

$$\underline{\quad} + \underline{\quad} + 5 = \underline{\quad}$$

$$\underline{\quad} + \underline{\quad} + 5 = \underline{\quad}$$

$$\underline{\quad} + \underline{\quad} + 5 = \underline{\quad}$$

$$\underline{\quad} + \underline{\quad} + 5 = \underline{\quad}$$

$$\underline{\quad} + \underline{\quad} + 5 = \underline{\quad}$$

$$\underline{\quad} + \underline{\quad} + 5 = \underline{\quad}$$

$$\underline{\quad} + \underline{\quad} + 5 = \underline{\quad}$$

$$\underline{\quad} + \underline{\quad} + 5 = \underline{\quad}$$

Roll & Cover Multiplication

How to Play:

Roll two dice and multiply them together and cover the answer. Record your answers below.

___ x ___ = ___

___ x ___ = ___

___ x ___ = ___

___ x ___ = ___

___ x ___ = ___

___ x ___ = ___

___ x ___ = ___

___ x ___ = ___

___ x ___ = ___

___ x ___ = ___

___ x ___ = ___

___ x ___ = ___

___ x ___ = ___


___ x ___ = ___

___ x ___ = ___

___ x ___ = ___

___ x ___ = ___

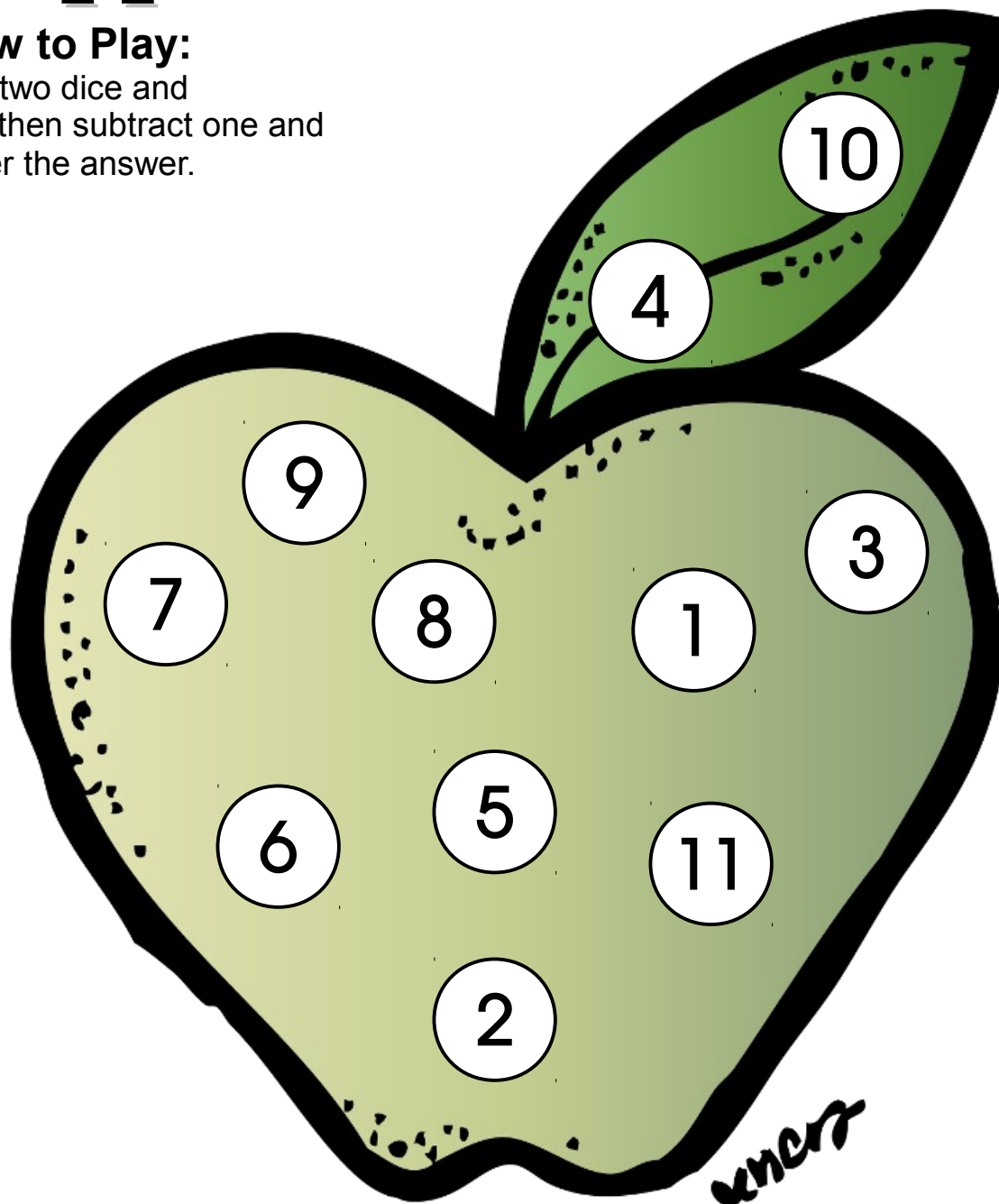
___ x ___ = ___



Apple Roll & Subtract 1 & Cover

How to Play:

Roll two dice and
add then subtract one and
cover the answer.



$$\underline{\quad} + \underline{\quad} - 1 = \underline{\quad}$$

$$\underline{\quad} + \underline{\quad} - 1 = \underline{\quad}$$

$$\underline{\quad} + \underline{\quad} - 1 = \underline{\quad}$$

$$\underline{\quad} + \underline{\quad} - 1 = \underline{\quad}$$

$$\underline{\quad} + \underline{\quad} - 1 = \underline{\quad}$$

$$\underline{\quad} + \underline{\quad} - 1 = \underline{\quad}$$

$$\underline{\quad} + \underline{\quad} - 1 = \underline{\quad}$$

$$\underline{\quad} + \underline{\quad} - 1 = \underline{\quad}$$

$$\underline{\quad} + \underline{\quad} - 1 = \underline{\quad}$$

$$\underline{\quad} + \underline{\quad} - 1 = \underline{\quad}$$

$$\underline{\quad} + \underline{\quad} - 1 = \underline{\quad}$$






Apple Math Sorting









5

6

7












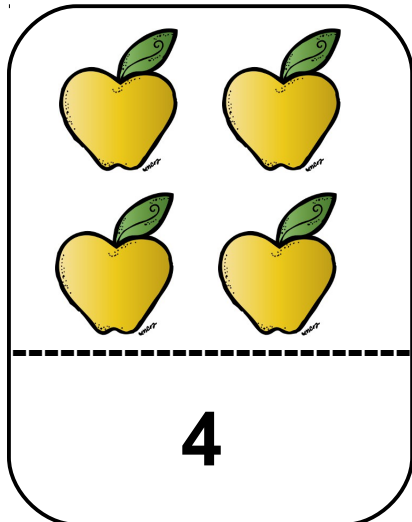
Apple Counting Adding



Look at the pictures & numbers below draw the third number that would add up to 10



= 10









= 10

Matching Numbers

Name: _____

Cut out the apples number words below and match them to the correct number.



Created by Cassie @ 3Dinosaurs.com

