



Winter Olympics Pack Part 5

Thanks for stopping by and downloading my Winter Olympics Pack. Be sure to download Part 1, 2, 3, 4 & Tot Pack.

These printables are provided *FREE* of charge. Please do share my printables. But please remember that all of my printables are for personal use. You cannot claim these printables or sell them as your own. All the printables and pictures are the property of 3 Dinosaurs.

Please DO

- Download the files to your computers and print them off for personal use.
- Direct people to the blog or site when sharing with others.
- Give proper credit back to 3 Dinosaurs when blogging about our files.

You May Not

- Link directly to the pdf file.
- Alter my files in any way.
- Store them on your website in any format.
- Seek to use these to drive traffic to your site or sell them in any way.
- Print off and sell them to others.

Please remember this is about being Honest.

I reserve the right to change this policy at any time.

Please read the [Terms of Use](#). If you have any questions please let me know.

Thanks!

3Dinosaurs.com



Graphics: Purchased from [Melonheadz Illustrations](#) & [Scrappin Doodles](#);

Winter Olympics Pack Index

Part 1

3-6 – 3 Part Cards
 7-8 - Which One Is Different
 9-10 - What Comes Next?
 11-13 - Prewriting Practice
 14 – Pattern Cards
 15-16 – Matching Cards
 17-24 – 4 Piece Puzzles
 25-28 – 10 piece puzzles
 29-32 – 1 to 15 Clip & Count Cards
 33 – Dot The O
 34 – Trace the Oo
 35 - Follow the Letter O Path

Part 2

3-4 – Beginning Sound
 5 – Size Sequencing
 6-8 - Size Sorting
 9-19 – Writing about the Word
 20-31 – Trace & Color
 32-34 – Wall Cards
 35-40 – Trace Begging Sound
 41-43 – Trace the Word
 44-46 – Write the Word

Part 3

3 – Olympic Sorting
 4 – Ring Color by Size
 5 – Count and Color
 6-11 – Math Pages (addition, subtraction, greater than/less than, counting)
 12-13 – Medal Color Matching
 14 – Tally the Olympic Medals
 15-16 - Medal 100 charts
 17-25 – Roll & Count with Math questions
 26-27 – Fill in the Missing Numbers
 28-29 – Describe the Olympics & writing
 30 - Olympics Acrostic Poems
 31 – Read write & Stamp
 32-36 – Describe the Sport

Tot Pack

3-8 - Solid Line Prewriting
 9-14 - Dashed Line Prewriting
 15-16 – Which One is Different
 17-18 – Color by Size
 19-22 – 2 Piece Puzzles
 23-25 – Ring Color Book
 27 – Matching Cards
 28 – 9 Piece Puzzle
 29-31 – Matching Single Page
 32-33 – Roll & Count
 34-35 – Shape Tracing
 36-40 – Dot the Letter (O, F, H, S, C)
 41 – S Tracing & Coloring

Part 4

3 - Color the Pattern
 4-5 – Fill in the Missing Pattern
 6 – Count and Match
 7-10 – Roll & Cover (Addition, Subtraction, & Multiplication)
 11-14 – Writing Olympic Word Writing (blends & begging sound)
 15-16 – Addition Math
 17-18 – Wall Card Sentences

Part 5

3 – Winter Olympic Writing
 4 – Olympic Map & Questions
 5 – Measure the Ski Jump
 6-7 – Shadow Matching
 8 – Missing Letters
 9 – What time is Faster?
 10-14 - Addition & Subtraction Pages
 15 – Draw three people on the Podiums
 16-17 Winter Olympic Word Problems
 18 – Skip Counting
 19-20 Count & Graph
 21 – Color the Same
 22 – What Place am I?
 23-24 – Cutting Practice



Winter Olympic Writing



Read, trace and write the following sentences.

I see gold medals.

I see gold medals.

I see bronze medals.

I see bronze medals.

I see silver medals.

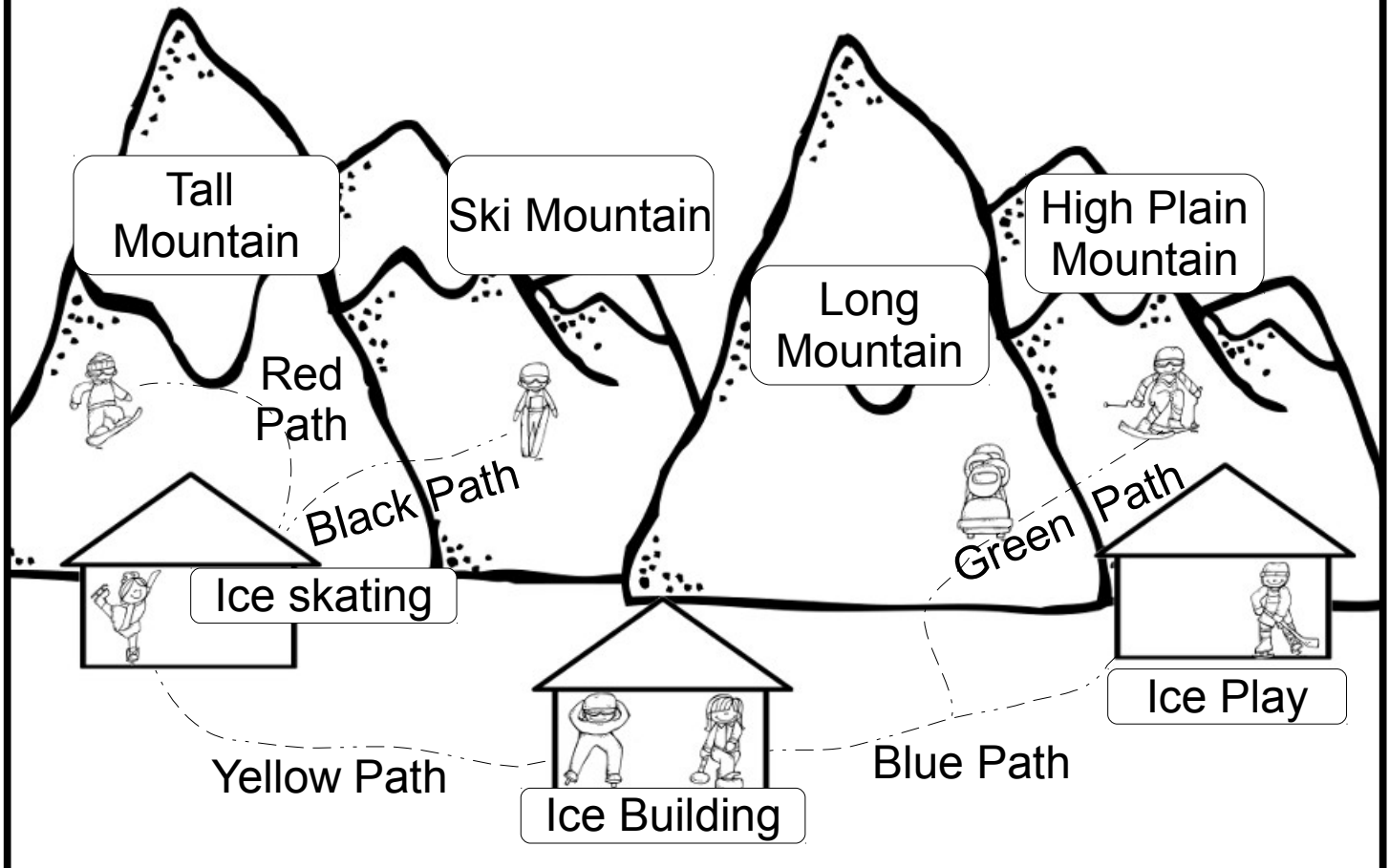
I see silver medals.



The Olympic Map



Created by Cassie @ 3Dinosaurs.com



Trace the Red Path red.
Trace the Yellow Path yellow
Trace the Blue Path blue

Trace the Green Path Green
Trace the Black Path Blank

How do I get to the Ski Mountain from Ice Building? _____

Where can you find Speed Skating? _____

Where can you find Skiing? _____

Where can you find Snowboarding? _____

Where can you watch Bobsledding? _____



Measuring the Ski Jumps



Measure the ski jumps using a ruler, paper clips or cubes.

1.



2.



3.







4.



5.



































Missing Letters



Fill in the missing letters on the snowboarders.



What Time is Faster?



Each bobsledding team does three run. Circle their fastest time.



1 minute 30 seconds
3 minutes 10 seconds
2 minutes 15 seconds



1 minutes 12 seconds
59 seconds
1 minutes 20 seconds




3 minute 10 seconds
2 minutes 10 seconds
1 minutes 5 seconds



2 minutes 1 second
1 minute 15 seconds
2 minutes 15 seconds



+



=



+



=



+



=



+



=



+



=



-



=



-



=



-



=



-



=



-



=

Addition & Subtraction Winter Olympics

Add and subtract the math problems below.

$$7 + \begin{array}{c} \text{SILVER} \end{array} = \underline{\hspace{2cm}}$$

$$9 - \begin{array}{c} \text{BRONZE} \end{array} = \underline{\hspace{2cm}}$$

$$3 + \begin{array}{c} \text{GOLD} \end{array} = \underline{\hspace{2cm}}$$

$$5 - \begin{array}{c} \text{BRONZE} \end{array} = \underline{\hspace{2cm}}$$

$$11 - \begin{array}{c} \text{O} \\ \text{O} \\ \text{O} \\ \text{O} \\ \text{GOLD} \end{array} = \underline{\hspace{2cm}}$$

$$9 - \begin{array}{c} \text{O} \\ \text{O} \\ \text{SILVER} \end{array} = \underline{\hspace{2cm}}$$

$$7 + \begin{array}{c} \text{O} \\ \text{O} \\ \text{O} \\ \text{O} \\ \text{BRONZE} \end{array} = \underline{\hspace{2cm}}$$

$$7 - \begin{array}{c} \text{O} \\ \text{O} \\ \text{GOLD} \end{array} = \underline{\hspace{2cm}}$$

$$10 + \begin{array}{c} \text{O} \\ \text{O} \\ \text{O} \\ \text{SILVER} \end{array} = \underline{\hspace{2cm}}$$



Color Addition



Dot the numbers that equal the number above it.

16

6

10

7

14

7

7

9

9

3

4

5

15

6

10

9

16

9

8

8

4

1

2

3

8

5

6

2

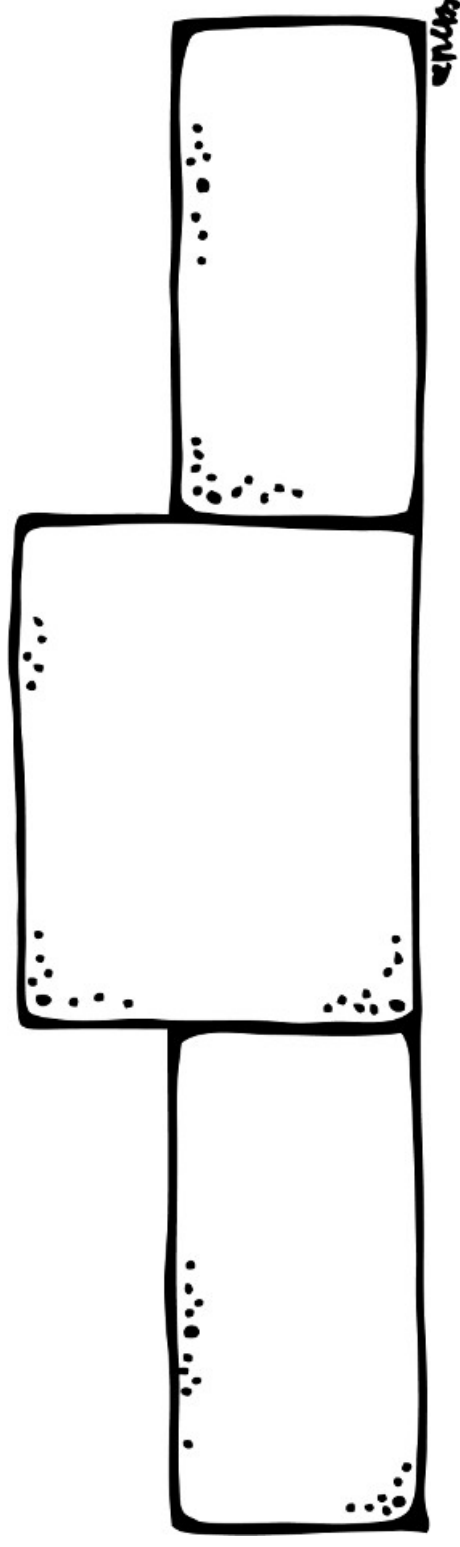
13

7

6

3

Draw Three People on the Podium with Medals.




Created by Cassie @ 3Dinosaurs.com

Winter Olympic Questions

Answer the following questions. Show how you got the answer.

Sweden's 1st bobsledding team did 4 runs and the 2nd team did 2. How many runs did they make? _____




Weston skated 4 races and Karlie skated 3 races. How many more races did Weston skate? _____



Winter Olympic Questions

Answer the following questions. Show how you got the answer.

The speed skaters earned 9 medals and the skiers earned 12 medals. 7 of those medals were gold. How many were not gold? _____



Arianna presented 33 medals and Keaton presented 21 medals. How many more medals did Arianna present? _____



Skip Counting Numbers

Fill in the skip numbers counting by 10.



41

71



Fill in the skip numbers counting by 10.



2

22



Fill in the skip numbers counting by 10.



13

43



Fill in the skip numbers counting by 10.



37

87



Fill in the skip numbers counting by 10.








24

64







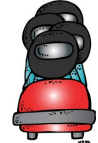

Winter Olympic Count and Graph



Winter Olympic Count and Graph



5	5	5	5	5
4	4	4	4	4
3	3	3	3	3
2	2	2	2	2
1	1	1	1	1
				

Color the Same

Look at the first picture and color the one that is the same.



What Place Am I?






Fill in the the missing numbers.



____ 2nd ____ 4th 5th ____ 7th ____

Color 3rd place person yellow.
Color 5th place person green.
Color 1st place person blue.
Color 6th place person orange.

Color 8th place person red.
Color 2nd place person black.
Color 4th place person pink.
Color 7th place person white.



1st 2nd 3rd 4th 5th

What number skater is in second place? _____


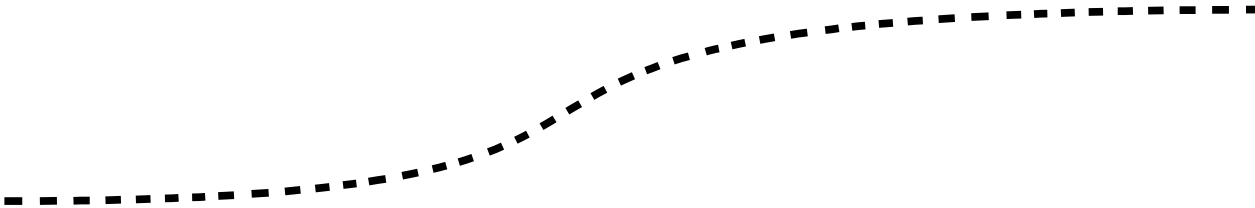

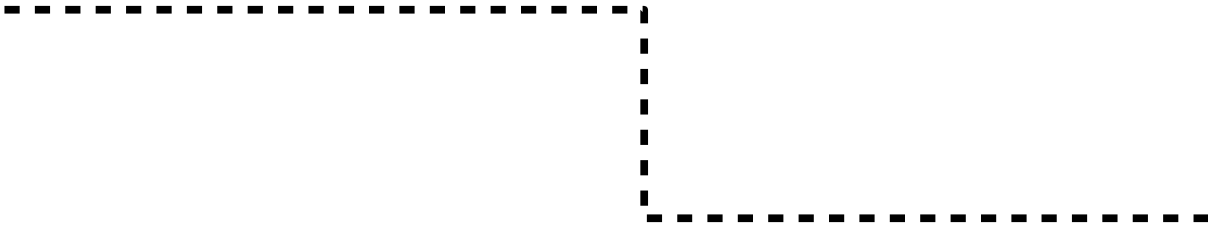
What number skater is in first place? _____

What number skater is in third place? _____

What number skater is in fifth place? _____

What number skater is in fourth place? _____

Cutting Practice



Cutting Practice

