



Pack Part 3

Thanks for stopping by and downloading my Snow Learning Pack. Be sure to download Part 1, 2, 3, & Tot Pack.

These printables are provided *FREE* of charge. Please do share my printables. But please remember that all of my printables are for personal use. You cannot claim these printables or sell them as your own. All the printables and pictures are the property of 3 Dinosaurs.

Please DO

- Download the files to your computers and print them off for personal use.
- Direct people to the blog or site when sharing with others.
- Give proper credit back to 3 Dinosaurs when blogging about our files.

You May Not

- Link directly to the pdf file.
- Alter my files in any way.
- Store them on your website in any format.
- Seek to use these to drive traffic to your site or sell them in any way.
- Print off and sell them to others.

Please remember this is about being Honest.

I reserve the right to change this policy at any time.

Please read the [Terms of Use](#). If you have any questions please let me know.



Thanks! 3Dinosaurs.com

Graphics: Purchased from [Melonheadz Illustrations](#)



Snow Pack Index

Part 1

3-4 – 3 Part Cards
5 - Which One Is Different
6 - What Comes Next?
7-8 - Prewriting Practice
9 – Pattern Cards
10-11 - Matching Cards
12-17 – 4 Piece Puzzles
18-20 – 10 Piece Puzzles
21-22 – Trace the Letter S
23 – Dot the S
24 – Color the S
25-30 – 0 to 20 Clip & Count Cards
31 – Trace the Snowflake

Part 2

3 –Begging Sound
4-5 - Pocket Chart Cards
6-9 – Trace Begging Sound
10-11 – Trace Words
12-13 – Write Words
14-16 – Write Sentences
17-19 – Trace & Color
20 – Snow Sorting
21 – Label Begging Sound
22 – Label the Snowman
23-24 – Snow Read, Trace and Write
25-26 – Describe Snowman & write Sentences
27-28 - Snow Acrostic Poems
29 – Fill in the Missing Snow Words
30 – Snow Read Write & Stamp
31 – Answer the Question Matching

Part 3

3 – Size Sequencing
4-5 – Size Sorting
6 - Snowman Color by Size
7 – Addition Sheets
8-13 – Hands on Math Sheets
14 – Math Matching
15-22 – Math Roll & Count with Math questions
23 – Snow Word Problems
24-26 – Fill In the Missing Number
27-28 – Count & Graph
29-30 – Addition & Subtraction Sheets

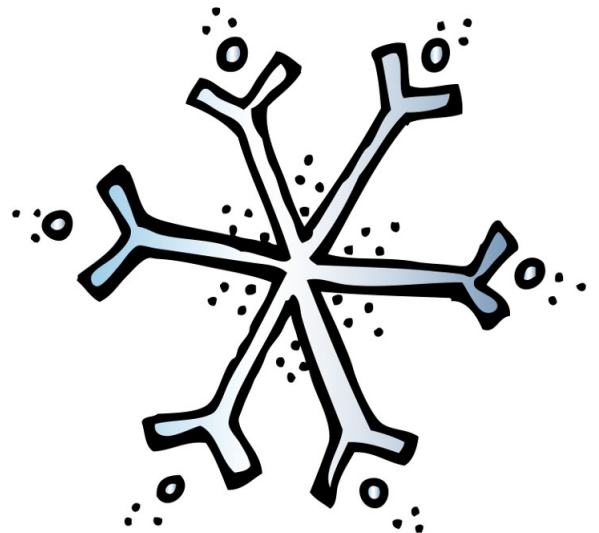
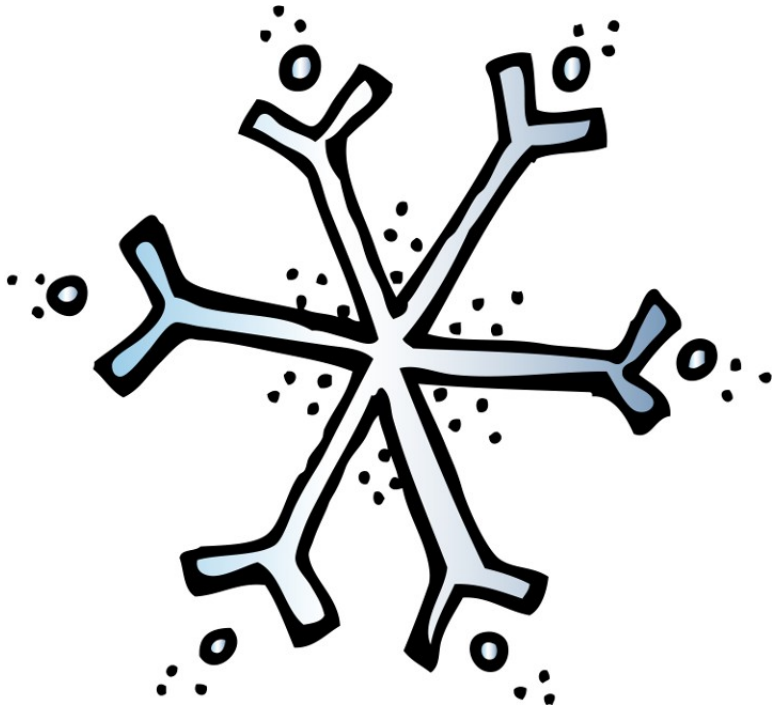

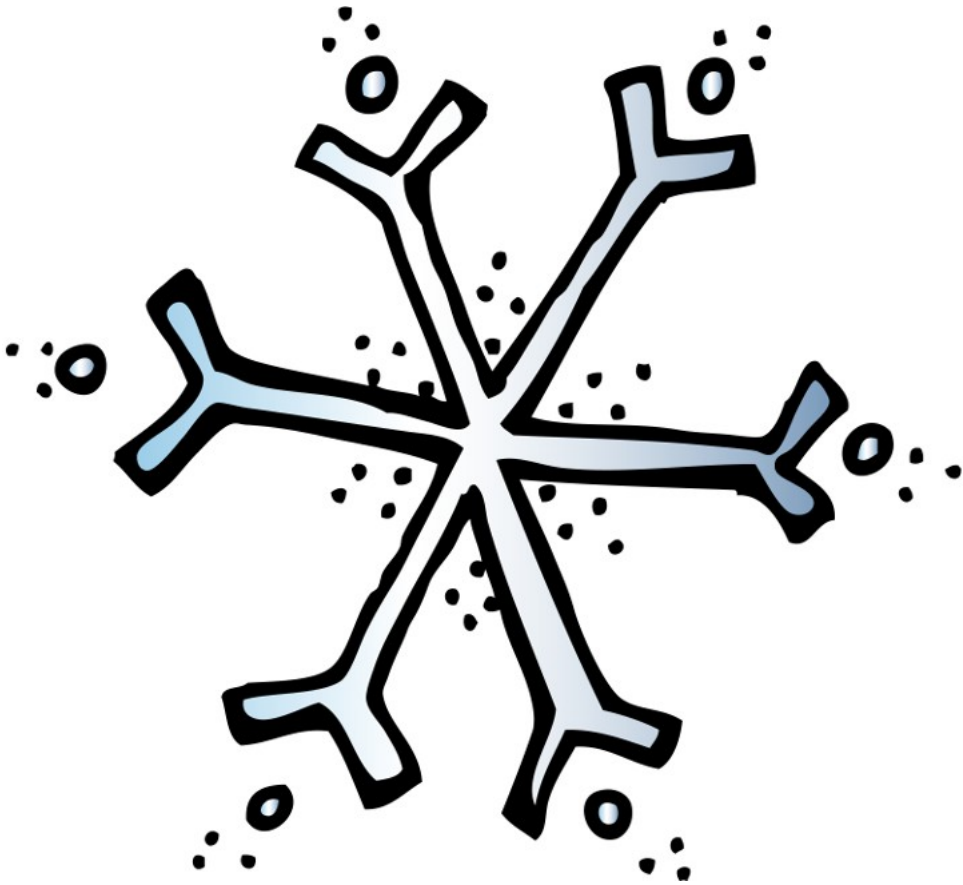
Tot Pack

3-8 - Solid Line Prewriting
9-14 - Dashed Line Prewriting
15-16 – Which One is Different
17 – Circle the Small Snowflakes
18-20 – 2 Part Puzzles
21-23 – Color the Snowflake
25 – Matching Cards
26 – 9 Piece Puzzle
27-29 – Matching
30-31 – Roll & Count
32-33 – Shape Tracing
34-35 - Dot the Letter S
36-38 – Lacing Cards


Part 4

3-4 - Color the Patterns
5-6 - Fill in the Missing patterns
7 – Count and Match
8 – Make Rhyming Words
9 – Number Line
10 – Fill in Missing Number Math
11-13 – Roll & Cover
14-15 – Writing Blends words
16 – Measure the Thermometer
17 – Pocket chart Sentences

Size Sequencing



Size Sorting



Created by Cassie @ 3Dinosaurs.com

Small

Medium

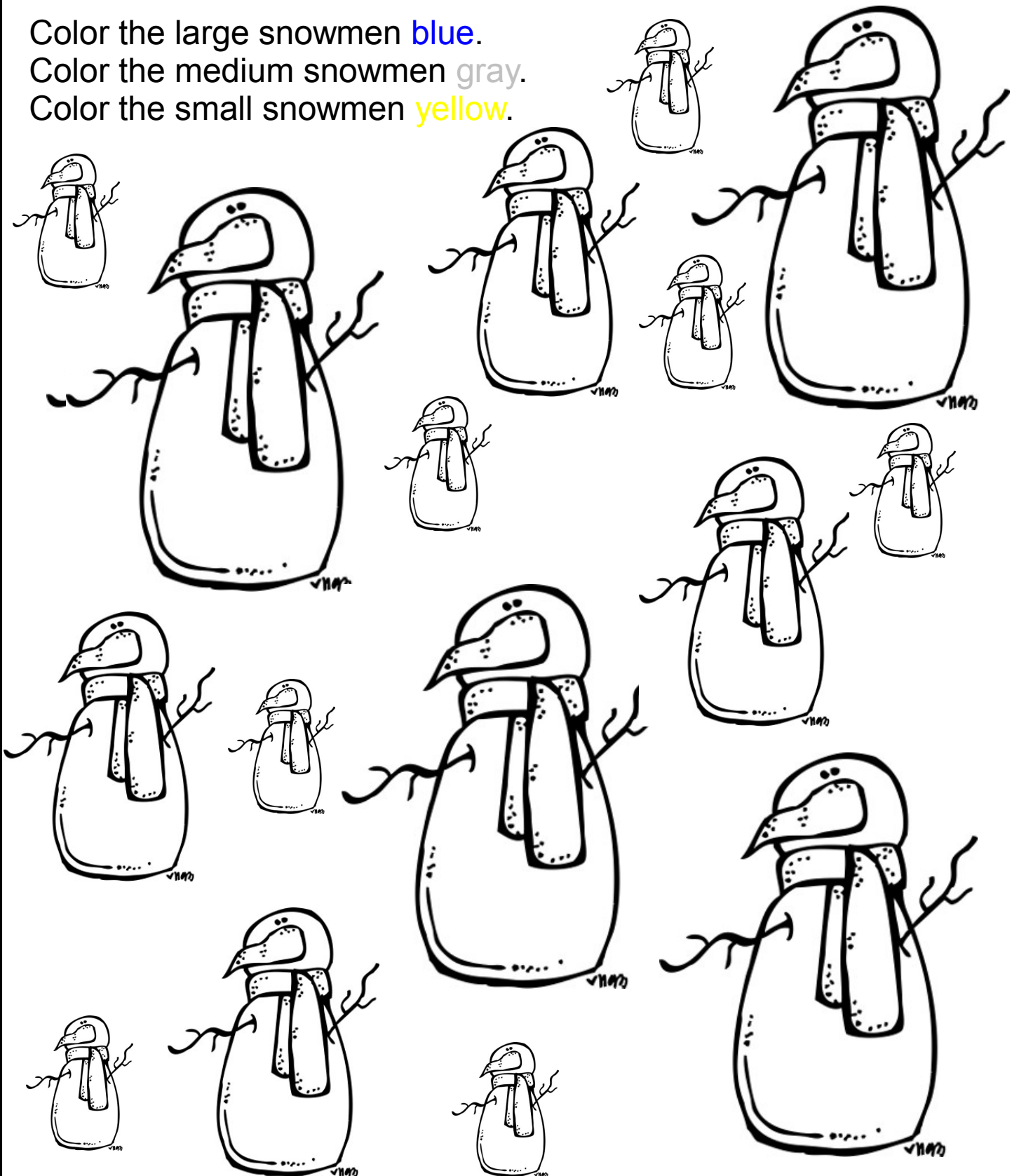
Large

Snowman Color by Size

Color the large snowmen **blue**.

Color the medium snowmen **gray**.


Color the small snowmen **yellow**.



Created by Cassie @ 3Dinosaurs.com



+



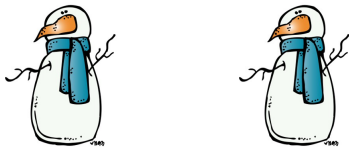
=




+



=



+




=



+

=




+




=



0	=	>	<	
1	2	3	4	5
6	7	8	9	10
1	2	3	4	5
6	7	8	9	10
11	12	13	14	15
16	17	18	19	20





Add the Snowman





+






Subtract the Snowman



Greater Than/ Less Than



Count the Snowman





Math Matching



$$12 - 5 = \underline{\quad}$$

1

$$7 - 2 = \underline{\quad}$$

6

$$14 - 8 = \underline{\quad}$$

5

$$10 - 7 = \underline{\quad}$$

10


$$11 - 1 = \underline{\quad}$$

3

$$4 - 3 = \underline{\quad}$$

7






Cut out and fold to make a dice.





Roll and Count Snow









5						
4						
3						
2						
1						
						




Roll and Count Snow



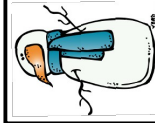
10						
9						
8						
7						
6						
5						
4						
3						
2						
1						
						

Snow Tally

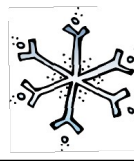
Total



Which
had the
most?



Which
had the
least?



Roll and Count Snow Questions



How many sledders? ____



How many mittens? ____



How many snowmen? ____



How many snow angels? ____



How many snowballs? ____



How many snowflakes? ____

Answer the following questions with the information above.



____ > = < ____



____ > = < ____



____ > = < ____



____ > = < ____



____ + ____ =



____ + ____ =



____ + ____ =



____ + ____ =



____ + ____ =



____ + ____ =



Roll and Count Snow Multiplication Questions



How many sledders? ____



How many mittens? ____



How many snowmen? ____



How many snow angels? ____



How many snowballs? ____



How many snowflakes? ____

Answer the following questions with the information above.



X



=



X



=



X



=



X



=



X



=



X



=



X



=



X



=



X



=



X



=

Roll and Count Christmas Subtraction Questions Up to 5



How many sledders? ____



How many mittens? ____



How many snowmen? ____



How many snow angels? ____



How many snowballs? ____



How many snowflakes? ____

Put the results in order largest to smallest.

A

B

C

D

E

F

Answer the following questions with the information above.

$$B \text{ } \underline{\quad} - C \text{ } \underline{\quad} = \underline{\quad}$$

$$A \text{ } \underline{\quad} - B \text{ } \underline{\quad} = \underline{\quad}$$

$$B \text{ } \underline{\quad} - D \text{ } \underline{\quad} = \underline{\quad}$$

$$A \text{ } \underline{\quad} - F \text{ } \underline{\quad} = \underline{\quad}$$

$$C \text{ } \underline{\quad} - C \text{ } \underline{\quad} = \underline{\quad}$$

$$C \text{ } \underline{\quad} - D \text{ } \underline{\quad} = \underline{\quad}$$

$$B \text{ } \underline{\quad} - F \text{ } \underline{\quad} = \underline{\quad}$$

$$5 - F \text{ } \underline{\quad} = \underline{\quad}$$

$$5 - A \text{ } \underline{\quad} = \underline{\quad}$$

$$5 - B \text{ } \underline{\quad} = \underline{\quad}$$

$$C \text{ } \underline{\quad} - F \text{ } \underline{\quad} = \underline{\quad}$$

$$F \text{ } \underline{\quad} - 0 = \underline{\quad}$$

Roll and Count Snow Subtraction Questions Up to 10



How many sledders? ____



How many mittens? ____



How many snowmen? ____



How many snow angels? ____



How many snowballs? ____



How many snowflakes? ____

Put the results in order largest to smallest.

A B C D E F

Answer the following questions with the information above.

$$A \text{ } \underline{\quad} - C \text{ } \underline{\quad} = \underline{\quad}$$

$$10 - B \text{ } \underline{\quad} = \underline{\quad}$$

$$B \text{ } \underline{\quad} - D \text{ } \underline{\quad} = \underline{\quad}$$

$$A \text{ } \underline{\quad} - F \text{ } \underline{\quad} = \underline{\quad}$$

$$A \text{ } \underline{\quad} - B \text{ } \underline{\quad} = \underline{\quad}$$

$$D \text{ } \underline{\quad} - E \text{ } \underline{\quad} = \underline{\quad}$$

$$10 - F \text{ } \underline{\quad} = \underline{\quad}$$

$$10 - F \text{ } \underline{\quad} = \underline{\quad}$$

$$B \text{ } \underline{\quad} - E \text{ } \underline{\quad} = \underline{\quad}$$

$$C - E \text{ } \underline{\quad} = \underline{\quad}$$

$$10 - E \text{ } \underline{\quad} = \underline{\quad}$$

$$E \text{ } \underline{\quad} - E \text{ } \underline{\quad} = \underline{\quad}$$



Snow Math Questions



Answer the following questions. Show how you got the answer.

Colton caught 3 snowflakes. Quynn caught some snowflakes. Together they caught 8 snowflakes. How many did Quynn catch? _____

Karlie made 3 snowmen. Weston made 4 Snowmen. How many snowmen did they make? _____

Fill in the Missing Numbers



Fill in the numbers from 3 to 8.



3

8



Fill in the numbers from 21 to 26.



21

23

26



Fill in the numbers from 44 to 49.



44

49



Fill in the numbers from 73 to 78.



74

76

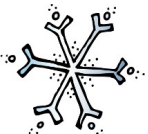


Fill in the numbers from 49 to 54.

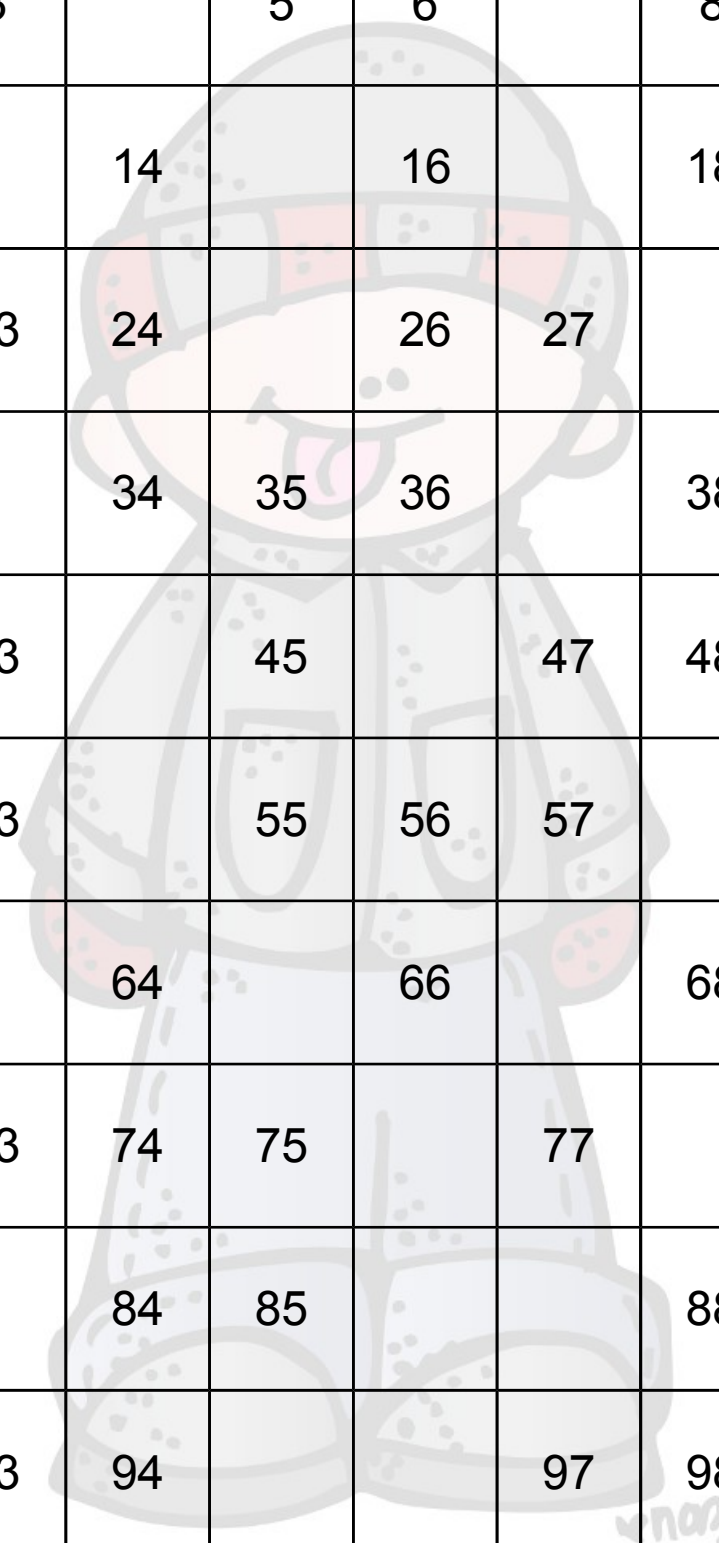


49

54



Fill in the Missing Numbers



1		3		5	6		8	9	
11	12		14		16		18		20
		23	24		26	27			30
31	32		34	35	36		38	39	
	42	43		45		47	48		50
51		53		55	56	57		59	60
	62		64		66		68	69	
71		73	74	75		77		79	80
81			84	85			88	89	
91	92	93	94			97	98		100






Fill in the Missing Numbers

	102	103		105		107		109	110
111			114	115					120
	122	123			126	127	128		
		133	134				138	139	
141		143		145		147	148		150
151	152			155	156			159	
161		163	164		166	167		169	170
		173	174			177	178		
181		183		185		187	188		190
191			194	195			198		



Snow Count and Graph










Snow Count and Graph



5	5	5	5	5
4	4	4	4	4
3	3	3	3	3
2	2	2	2	2
1	1	1	1	1
				

Addition & Subtraction Snow

Add and subtract the math problems below.

$10 -$

 $=$

$6 +$

 $=$

$12 -$

 $=$

$7 +$

 $=$

11

-



=

5

+



=

8

-



=

9

-



=

8

+



=
